



SUMMER VACATION HOMEWORK 2026-27

This booklet belongs to



CLASS-II

Dear Parents,

Summer is a wonderful time for children to relax, recharge, and grow beyond the classroom. While rest and enjoyment are important, this break also offers a valuable opportunity for meaningful learning through every day experiences.

We request you to support your child in completing the holiday homework independently, encouraging responsibility, creativity, and confidence. Your gentle guidance will help them present their work neatly and thoughtfully.

We also encourage you to let your children explore, imagine, and discover the world around them. While digital devices have become a part of daily life, choosing meaningful and age-appropriate content for them is truly important. Help them use technology wisely as a tool for learning rather than just entertainment.

Spend quality time together as a family—play games, listen to music, cook simple meals together, share stories, and laugh often. These moments build strong bonds and create lasting memories.

Use this time to nurture values like empathy, kindness, sharing, and respect. Encourage your child to help others, express gratitude, and understand the feelings of people around them.

Let this summer be a balance of learning, creativity, and joy.

Wishing you and your child a happy, safe, and enriching summer vacation!



Day-1 -05/05/2026

Introduce Yourself

Complete the information about yourself.

Hello everyone. My name is _____. I am _____ years old. I was born on _____. At the moment, I live in _____ . I study in _____ school.

There are _____ people in my family. I have _____ sister/s and _____ brother/s.

Now I would like to share about my likes and dislikes. My favourite colour is _____ but I don't like _____. I love eating _____ fruit but I don't like _____. I always like to eat _____ but I never try to eat _____. My favourite animal is _____ but I'm afraid of _____. I am interested in playing _____ but I am bored with _____. In my free time, I like to _____. When I grow up, I want to become _____. That's all for now. Goodbye!

Me & My family

Blank space for drawing or writing about 'Me & My family'.

Common and Proper Noun

Put the given nouns in the correct column.

father	teacher	Tesla
shoes	car	boy
Africa	Riya	tree
pencil	candy	Shimla
Jerry	Oreo	cake
Earth	dog	Ganga
eraser	Mt. Everest	chair
India	book	Samsung

Common Noun	Proper Noun



Common Noun and Proper Noun

Read the following sentences. Circle the common noun and underline the proper noun.

1. My brother goes to Hillside School.
2. We are visiting Aunt Mary today.
3. The cat is sleeping on the rug.
4. New Delhi is a very busy city.
5. Bruno wagged his tail at the boy.
6. I saw a big elephant at the zoo.
7. Every Monday we go to the library.
8. Arjun is eating a sweet mango.
9. The bus stopped at Green Park.
10. Pinky lost her favourite pencil.
11. We saw the Taj Mahal in Agra.
12. The doctor works at City Hospital.
13. Rahul is reading a book.
14. We go to the park every Sunday.

Go ✈️
Explore!

Write the names of two animals from the cat family?

Click on **link-1** given below to find out the answer.



World RED CROSS Day

Day-4-08/05/2026

On the occasion of **WORLD RED CROSS DAY**, read the given passage on how to help others and make sure to do at least one act of kindness by the end of the day.

Helping others is a nice thing to do. It is a way to show kindness. Helping others can make you feel good inside. When you help someone, you make them happy too. You can help your friends, your family, and other people. You can help by sharing your toys, giving them a hug or a smile, and saying kind words. You can also listen when they need someone to talk to. Helping others makes them feel good. It is important to always be kind and help others whenever you can. The world becomes a better place when we help each other.

Answer the questions based on the passage:

1. The passage is mainly about:
 - a. acts of kindness
 - b. helping others
 - c. getting along
2. Helping others can make us:
 - a. feel good inside
 - b. give others a hug
 - c. work harder
3. We can help others by:
 - a. sharing
 - b. giving hugs
 - c. Both
4. Saying kind words and listening is an example of:
 - a. sharing
 - b. helping others
 - c. good friendship
5. The world is a better place when we:
 - a. sleep well
 - b. eat well
 - c. help others



कहानी: सच्चाई की जीत

रवीन्द्रनाथ ठाकुर जब छोटे थे, तो एक बार की बात है। वे अपने घर के बाग में खेल रहे थे। खेलते-खेलते उन्होंने गलती से एक फूल का पौधा तोड़ दिया।

उन्हें डर लगा कि घर के बड़े डाँटेंगे। लेकिन फिर उन्होंने सोचा, "झूठ बोलना अच्छा नहीं है।" वे सीधे अपने पिताजी के पास गए और बोले,

"पिताजी, मुझसे गलती हो गई। मैंने फूल का पौधा तोड़ दिया।"

पिताजी ने गुस्सा नहीं किया। उन्होंने रवीन्द्रनाथ को गले लगाते हुए कहा,

"बेटा, गलती करना बुरा नहीं है, लेकिन गलती छुपाना बुरा है। तुमने सच्चाई बताकर बहुत अच्छा काम किया।"

1. रवीन्द्रनाथ ने क्या तोड़ दिया था?

- a) खिलौना
- b) किताब
- c) फूल का पौधा


2. रवीन्द्रनाथ को किस बात का डर था?

- a) भूख लगने का
- b) डाँट पड़ने का
- c) खेलने से मना करने का

3. हमें इस कहानी से क्या सीख मिलती है?

- a) झूठ बोलना ठीक है
- b) डरकर भाग जाना चाहिए
- c) हमेशा सच बोलना चाहिए

Rabindranath
TAGORE
Jayanti



Write the letters in the correct order to find the **SECRET WORD**.

Hint:1 Arrange in **ASCENDING** order (smallest to biggest) and find the word:

1. 23-L, 11-T, 15-A, 21-B, 42-E

Secret Word: _____

2. 42-M, 31-R, 36-U, 27-D

Secret Word: _____

3. 18-V, 12-I, 25-E, 10-R, 56-R

Secret Word: _____

Hint:2 Arrange in **DESCENDING** order (biggest to smallest) and find the word:

1. 21-T, 35-U, 29-I, 77-F, 62-R

Secret Word: _____

2. 48-E, 52-N, 44-S, 32-T

Secret Word: _____

3. 73-E, 68-A, 79-P, 54-R

Secret Word: _____

★ **Challenge:** First arrange in ascending, then descending, and find **TWO** words:

1. 34-P 22-T 29-O

Secret Word with ascending order: _____

Secret Word with descending order: _____

Go 
Explore!

Which is the loudest animal on Earth found in the ocean?

Click on **link-2** given below to find out the answer.



Plants Our Friends

- Name two major parts of a plant: _____
- Name a fruit with one seed: _____
- Name a fruit with many seeds: _____
- Two vegetables that can be eaten raw: _____
- Two leaves used as medicine: _____
- Name any two flowers: _____
- Name a fruit with no seed: _____

Hints

Banana, Neem, Leaves, Orange, Marigold, Cucumber, Tulsi, Mango, Carrot, Root, Hibiscus

Solve the puzzle and complete the table given below:



Fruits	Nuts	Vegetables	Food-grain



Which is the coldest place on Earth where humans live?

Click on **link-3** given below to find out the answer.



Circle the pronouns with blue colour:

1. She is my best friend.
2. He is playing with a ball.
3. They are going to school.
4. We are learning English.
5. It is a beautiful flower.
6. I have a new pencil.
7. You are very kind.
8. She has a red dress.
9. They like to play football.
10. He is my brother.



Deep under the ocean lies a mysterious place called the Mariana Trench, where it is dark and very deep!

Fill in the blanks with suitable pronouns:

1. Riya is my sister. _____ is very helpful.
2. Mohan is playing. _____ is happy.
3. The dog is barking. _____ is loud.
4. Ritu and Siya are friends. _____ are kind.
5. My parents love me. _____ care for me.
6. Rahul has a kite. _____ is flying high.
7. The boys are running. _____ are fast.
8. The cat is sleeping. _____ is on the sofa.
9. I and my friend are going to school. _____ are ready.
10. This is my book. _____ is new.



प्रश्न1: रिक्त स्थान भरिए ।

(आम, टमाटर, केला, पालक)

1. _____ एक हरी पत्तेदार सब्जी है।
2. _____ एक पीला फल है।
3. _____ एक लाल सब्जी है।
4. _____ फलों का राजा कहलाता है।



प्रश्न2: मिलान कीजिए ।

(फल / सब्जियाँ)	(रंग)
सेब	हरा
केला	पीला
पालक	लाल
गाजर	नारंगी

A day on Earth is not exactly 24 hours- it is actually 23 hours, 56 minutes, and 4 seconds!

प्रश्न3: सही या गलत लिखिए ।

1. केला एक सब्जी है। _____
2. भिंडी एक सब्जी है। _____
3. आम एक फल है। _____
4. टमाटर हरे रंग का होता है। _____



Q1. Write the tens and ones:

Example: $34 = 3 \text{ tens} + 4 \text{ Ones}$

- a) $25 = \underline{\hspace{2cm}} \text{ tens} + \underline{\hspace{2cm}} \text{ ones}$
- b) $47 = \underline{\hspace{2cm}} \text{ tens} + \underline{\hspace{2cm}} \text{ ones}$
- c) $63 = \underline{\hspace{2cm}} \text{ tens} + \underline{\hspace{2cm}} \text{ ones}$
- d) $18 = \underline{\hspace{2cm}} \text{ ten} + \underline{\hspace{2cm}} \text{ ones}$
- e) $90 = \underline{\hspace{2cm}} \text{ tens} + \underline{\hspace{2cm}} \text{ ones}$

Q2. Fill in the blanks:

- a) $56 = \underline{\hspace{2cm}} \text{ tens} + \underline{\hspace{2cm}} \text{ ones}$
- b) $\underline{\hspace{2cm}} \text{ tens} + 3 \text{ ones} = 73$
- c) $40 = \underline{\hspace{2cm}} \text{ tens} + \underline{\hspace{2cm}} \text{ ones}$
- d) $6 \text{ tens} + \underline{\hspace{2cm}} \text{ ones} = 68$
- e) $\underline{\hspace{2cm}} \text{ tens} + \underline{\hspace{2cm}} \text{ one} = 91$

Q3. Write the number:

Example: $5 \text{ tens} + 2 \text{ ones} = 52$

- 1. $3 \text{ tens} + 6 \text{ ones} = \underline{\hspace{2cm}}$
- 2. $7 \text{ tens} + 1 \text{ one} = \underline{\hspace{2cm}}$
- 3. $4 \text{ tens} + 5 \text{ ones} = \underline{\hspace{2cm}}$
- 4. $8 \text{ tens} + 0 \text{ ones} = \underline{\hspace{2cm}}$
- 5. $2 \text{ tens} + 9 \text{ ones} = \underline{\hspace{2cm}}$

Q4. Match the Columns:

words

Thirty-five

Sixty-nine

Fifty-four

Twenty-eight

Ninety-two

tens and ones

a) 2 tens and 8 ones

b) 5 tens and 4 ones

c) 3 tens and 5 ones

d) 9 tens and 2 ones

e) 6 tens and 9 ones



Healthy Eating Habits

Write T for True and F for False.

- a) We should wash fruits before eating them. _____
- b) Eating too many chocolates is good for health. _____
- c) Drinking milk helps us grow strong. _____
- d) We should eat junk food every day. _____
- e) Vegetables help us stay healthy. _____
- f) Skipping breakfast is a good habit. _____
- g) Drinking plenty of water keeps us healthy. _____
- h) Eating fresh food is better than stale food. _____

Choose the correct word from the box.

(fruits, water, vegetables, breakfast, milk, junk food, hands, healthy, fresh, strong)

- a) We should wash our _____ before eating.
- b) Eating _____ and vegetables keeps us healthy.
- c) We should drink plenty of _____ every day.
- d) _____ makes our bones strong.
- e) We should eat _____ food daily.
- f) _____ is the most important meal of the day.
- g) Eating too much _____ is not good for health.
- h) We should eat _____ food instead of stale food.
- i) Healthy food makes us _____.
- j) Carrots and spinach are _____.



One large tree can provide oxygen for four people for a whole day.



Fill in the blanks with is am or are:

is

are

am

1. The school bell _____ ringing.
2. Birds _____ flying in the sky.
3. We _____ enjoying at the beach.
4. I _____ playing with my sister.
5. Anil _____ swimming in the pool.
6. These children _____ playing in the garden.
7. The cat _____ feeling hungry.
8. This _____ a lotus flower.
9. Raju and Bobby _____ friends.
10. I _____ listening to music.
11. Rita _____ drawing a picture.
12. You _____ reading a book.

Go 
Explore!

*Which is the largest moon in
our Solar System?*

Click on **link-4** given below to
find out the answer.

प्रश्न 1: सही विकल्प चुनिए-

अ) वर्ष का पहला महीना कौन-सा है?

(क) मार्च (ख) जनवरी (ग) जून

ब) दिसंबर के बाद कौन-सा महीना आता है?

(क) फरवरी (ख) जनवरी (ग) नवंबर

स) वर्ष का आखिरी महीना है -

(क) दिसंबर (ख) अक्टूबर (ग) अगस्त

द) जुलाई के बाद कौन-सा महीना आता है?

(क) जून (ख) अगस्त (ग) सितंबर

प्रश्न 2: खाली स्थान भरें:-

1. जनवरी के बाद _____ आता है।
2. मई से पहले _____ आता है।
3. सितंबर के बाद _____ आता है।
4. मार्च से पहले _____ आता है।

प्रश्न 3: सही (✓) या गलत (X) लिखें:-

1. अप्रैल, मार्च के बाद आता है। ()
2. नवंबर, दिसंबर के बाद आता है। ()
3. फरवरी, जनवरी के बाद आता है। ()
4. अगस्त, जुलाई के बाद आता है। ()

प्रश्न 4: आपका जन्मदिन किस महीने में आता है ?

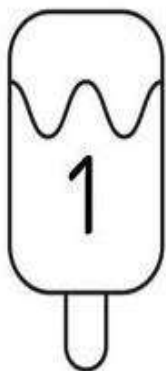









Baobab trees can store thousands of litres of water in their trunks!



ODD AND EVEN NUMBERS

Colour all the odd numbers in orange and all the even numbers in yellow.



PLANET SCRAMBLE

DIRECTION: Unscramble the names of the planets.



ERRMCYU



NVESU



ERHAT



MRSA



TPIRJEU



TSURNA



NUAUSR



ENUNEPT



Fill in the blanks with correct pronoun.

(He, She, They, We, It)

- a) Ria and Pihu are good girls. ~~~~~ are friends.
- b) The girls are in the playground. ~~~~~ are playing football.
- c) Arjun is my friend. ~~~~~ is a smart boy.
- d) This is a peacock. ~~~~~ is very beautiful.
- e) My father is sleeping. ~~~~~ is very tired.
- f) Me and my brother ate a sandwich because ~~~~~ were hungry.
- g) Ria has a pet dog. ~~~~~ also has a pet cat.
- h) My uncle is a greengrocer. ~~~~~ sells green vegetables.
- i) Me and my sister are going to market as ~~~~~ want to buy some vegetables.


Go Explore!

Which fish is made up of about 95% water with major organs inside the body?

Click on **link-6** given below to find out the answer.



प्र) चित्र देखकर खाली स्थान और रंग भरिए ।



लकड़ी	कागज़
पेड़	शुद्ध
छाया	घोंसले

- 1.) पेड़ हमें _____ देते हैं ।
- 2.) पेड़ हमें _____ हवा देते हैं ।
- 3.) पेड़ों पर चिड़ियाँ अपने _____ बनाती हैं ।
- 4.) पेड़ों से हमें _____ और _____ भी मिलते हैं ।
- 5.) हमें अधिक से अधिक _____ लगाने चाहिए ।

प्र) दिए गए चित्र को देखकर पाँच वाक्य लिखे ।



बड़ा	सुंदर
कमरे	आँगन
दीवार	खिड़की
पौधे	रंग

Day-18-25/05/2026

Months

1. What is the seventh month? _____
2. What is the third month? _____
3. What is the eighth month? _____
4. what is the fifth month? _____
5. What is the fourth month? _____
6. What is the tenth month? _____
7. What is the first month? _____

JANUARY	FEBRUARY	MARCH	APRIL	MAY	JUNE
JULY	AUGUST	SEPTEMBER	OCTOBER	NOVEMBER	DECEMBER

8. February is the _____ month of the year.
9. Name the month in the third position _____.
10. September is in the _____ position.
 - _____ numbers are the counting numbers.
 - Ordinal numbers show the _____.



Unscramble the letters and write the name of the picture.



e e y



a e r



o e n s



m a r



c f a e



i h r a



u t o h m



n a h d



h e t e t

















o t f o



Creative Writing

Complete the story by filling in the blanks. The picture clues will help you.

One day the _____  was shining. The _____  was sleeping. The _____  was sleeping. But the _____  saw a _____ .

"Help! Help!" The _____  cried. The _____  and the _____  hid in a _____ . The _____  flew into a _____ . The _____  jumped into a _____ , and the _____  went on shining.



Plastic can take up to 1000 years to break down in nature.



दिए गए गद्यांश को पढ़कर उत्तर लिखिए -

आँचल अपनी दादी के साथ एक गाँव में रहती है। थोड़ी ही दूर पर एक जंगल है। वह सुबह उठकर दाँत साफ़ करके नहाती है। फिर दादी माँ के साथ जंगल तक सैर करने जाती है। चंपा और उमंग उसके दोस्त हैं वे दोनों जंगल के पास रहते हैं। जंगल में बहुत से बंदर और लंगूर हैं। शाम को पाँच बजे चंपा और उमंग जंगल में खेलने जाते हैं। जंगल में एक चंदन का पेड़ है। कभी-कभी वहाँ साँप भी दिखते हैं। जब बंदर पेड़ पर बैठ कर अपनी पूँछ हिलाते हैं तो आँचल को यह देखकर बड़ा मज़ा आता है और वह ज़ोर-ज़ोर से हँसने लगती है।

➤ आँचल सुबह उठकर क्या करती है ?

क -बाल बनाती है।

ख -दाँत साफ़ करके नहाती है।

ग -खाना खाती है।

➤ आँचल के दोस्तों के क्या नाम थे ?

क-चंपा और उमंग

ख-रानी और राजू

ग- सोनू और मोनू

➤ जंगल में किसका पेड़ था ?

क - पीपल का

ख - नीम का

ग - चंदन का

दिए गए गद्यांश से दो-दो अनुस्वार और अनुनासिक वाले शब्द पहचानकर लिखिए-

अनुस्वार

अनुनासिक

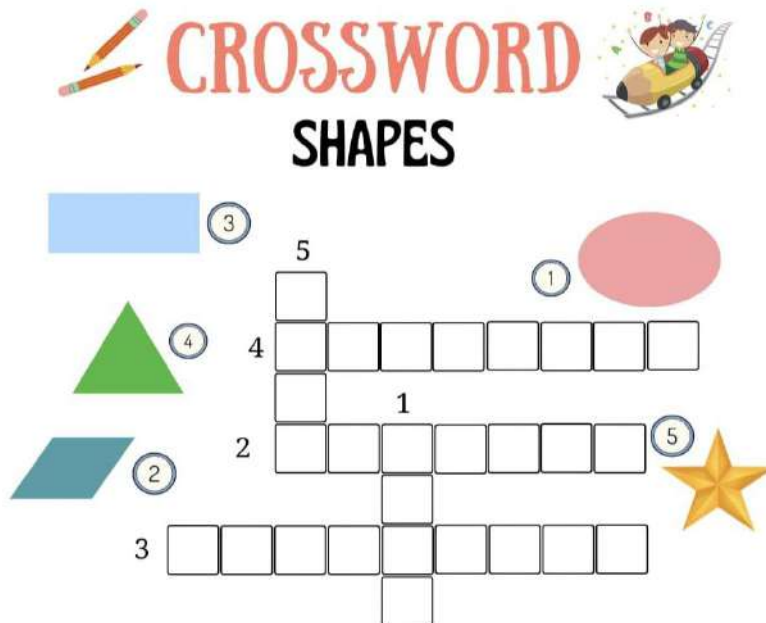


SHAPES

Q1) Fill in the Blanks

1. A circle has ____ sides.
2. A square has ____ sides.
3. A cube has ____ faces.
4. A sphere has ____ corners.
5. A cuboid looks like a ____.

Q2) Solve the below crossword puzzle



Q3) Circle the correct shape:

1. Ball → Cube Cylinder Sphere Cone
2. Birthday cap → Cube Cone Sphere Cylinder
3. Water bottle → Sphere Cylinder Cube Cone
4. Dice → Cone Cube Cylinder Sphere

Q4) Fill in the blanks:

1. A shape that looks like a book is called a _____.
2. A shape with 6 faces is called a _____.
3. A cone has _____ corner.
4. A cylinder has _____ faces.
5. A cube has _____ edges.




Animal and its Habitat


HABITATS

A place where a plant or animal grows or live in nature.


SAVANNA is land with warm climate and covered with grass and few trees.



FOREST is covered with trees and underbrush that has a diverse climate.



POND is a body of freshwater that is smaller than a lake.



DESERT is dry land with few plants and little rainfall.



Q) Write the names of **two animals** that live in each habitat given above:


SAVANNA
1.
2.

FOREST
1.
2.

POND
1.
2.

DESERT
1.
2.

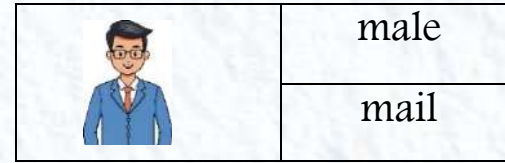
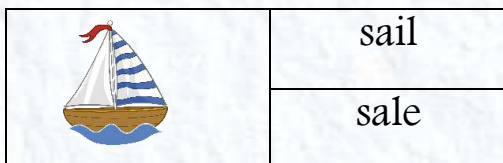
Q) Draw **four different** animals that belong to the given habitat below:



Day-24-02/06/2026

HOMOPHONES

Q) Colour the correct spelling for the given images:



Q) Tick (✓) the correct homophones to complete each sentence.

1. We went to the zoo and saw a (bare / bear).
2. We have (to / two) dogs and a cat.
3. My favourite colour is (blew / blue).
4. We saw a (dear / deer) in the forest yesterday.
5. My mother will (buy / bye) some fruits from the market.
6. My birthday is in (ate / eight) days!
7. Let's (not / knot) forget to do our homework.
8. (Right / Write) your name on the top of the page.
9. My grandma told me a bedtime (tail / tale) every day.
10. I (wood / would) like to eat an apple.

Day-25-03/06/2026

WORLD BICYCLE DAY



On Saturday, I took my _____ out to the park. The weather was _____ and the _____ was blue. I rode my bicycle on the _____ with my friends. We stopped near the _____ to drink some water. My father told me to always wear a _____ for safety. After playing, we ate _____ together. Riding my bicycle makes me very _____.

Choose answers from this box:

road, bicycle, tree, helmet, happy, sunny, sandwiches, sky

प्रश्न1) सप्ताह के दिनों के नाम :-

- 1..... 2..... 3
- 4..... 5..... 6.....
- 7.....

प्रश्न2) सही (✓) या गलत (X) लिखो:-

1. गुरुवार, बुधवार के बाद आता है। ()
2. रविवार, सोमवार से पहले आता है। ()
3. शुक्रवार, शनिवार के बाद आता है। ()
4. मंगलवार, सोमवार के बाद आता है। ()

प्रश्न3) रिक्त स्थान में सही दिन लिखो

1. आज सोमवार है, कल _____ था।
2. आज शुक्रवार है, कल _____ होगा।
3. आज रविवार है, कल _____ होगा।

प्रश्न4) अक्षरों को सही क्रम में लिखे :-

1. वारसोम → _____
2. वारलगमं → _____
3. वारशनि → _____
4. वारविर → _____

Go Explore!

Which planets are called jovial planets?

.....
.....

Click on **link-8** given below to find out the answer.



WORLD ENVIRONMENT DAY

Let's Recycle



Try to create a penstand with the help of plastic bottle or tissue roll.



































You can make something else also. Show your imagination and create.



Trees can help reduce noise pollution by up to 40%

Find the sum for each pair of space objects.

(For instance, in the first problem: ★ + ☾ =? If a Star is 7 and the Blue Planet is 4, then $7 + 4 = 11$)

									
1	2	3	4	5	6	7	8		
	+		=	<input type="text"/>		+		=	<input type="text"/>
	+		=	<input type="text"/>		+		=	<input type="text"/>
	+		=	<input type="text"/>		+		=	<input type="text"/>
	+		=	<input type="text"/>		+		=	<input type="text"/>
	+		=	<input type="text"/>		+		=	<input type="text"/>
	+		=	<input type="text"/>		+		=	<input type="text"/>

WORLD OCEAN DAY


Find the names of the sea animals and colour the picture.

SEA ANIMALS

WORD SEARCH



Prawn



Eel




Sea horse



Blowfish




Crab




Jelly fish

S	B	O	O	T	S	G	B	A	R	C
T	X	R	P	R	A	W	N	C	G	S
A	O	D	U	I	K	T	Y	F	O	X
R	P	C	O	R	P	N	M	T	O	O
F	P	A	A	K	D	F	T	J	R	B
I	O	H	S	I	V	Y	O	E	E	L
S	S	D	U	F	D	H	S	L	E	O
H	K	Q	V	T	C	R	T	L	W	W
B	S	H	G	W	O	H	P	Y	X	F
V	X	O	S	H	U	T	O	F	A	I
X	D	T	A	A	I	O	O	I	Z	S
S	Z	E	C	L	Y	U	I	S	O	H
Z	S	L	F	E	E	T	F	H	T	T

Ms. Hashiha




Whale



Squid



Starfish



Shark



नीचे दिए गए शब्दों से कहानी पूरी करें

खरगोश और कछुआ

एक बार की बात है, जंगल में एक _____ और एक _____ रहते थे।

खरगोश बहुत _____ था, और कछुआ _____ स्वभाव वाला था।

एक दिन _____ ने कछुए को _____ की चुनौती दी। और उन दोनों की _____ शुरू हो गई।

खरगोश _____ से दौड़ने लगा, जबकि कछुआ _____ आगे बढ़ रहा था।

बीच रास्ते में, खरगोश को _____ आ गई और वह _____ गया।

कछुआ धीरे से आगे बढ़ा और दौड़ _____ गया।

खरगोश शांत तेज़ी नींद कछुआ धीरे-धीरे

चालाक खरगोश दौड़ने सो जीत दौड़

CHILD SAFETY DAY

1. There is a stranger knocking at your door. He has come with some gifts but you have never seen him before. Should you open the door?



2. You see a small boy trying to climb a coconut tree. There is no adult around. Do you think it is safe? What would you do?



3. You are walking home from class. A car stops next to you, and a stranger offers to drop you home. Will you go with the stranger? What would you do?




4. You see a banana peel lying on the road. A girl is running to catch the bus and is about to step on the peel. What should you do?



SOME FUN LINKS TO ENJOY YOUR SUMMER:

<i>Link-1</i>	https://youtu.be/~_wHbtpzf0Y?si=mHL_P1VjDFuTab3E
<i>Link-2</i>	https://youtu.be/mdCa20EKTcY?si=vMHxXpM4_t4qk4ng
<i>Link-3</i>	https://youtu.be/OkpycSoEMiI?si=pT2uv1OipmLLcclR
<i>Link-4</i>	https://youtu.be/Ptkqws1bLY8?si=ODW96v4U2NvPfXYt
<i>Link-5</i>	https://youtu.be/kVm5k99PnBk?si=TQNUgyp1J08Hphw6
<i>Link-6</i>	https://youtu.be/9z8ujpPgUjI?si=1CT5IABz9h2_XDS-
<i>Link-7</i>	https://youtu.be/2HoTK_Gqi2Q?si=Taz8UODxo2dy60_h
<i>Link-8</i>	https://youtu.be/libKVRa01L8?si=0VJuziZS4Y5dQxJ3
<i>Link-9</i>	https://youtu.be/8adtdgON2-g?si=2f3gllEIX76gEA44
<i>Link-10</i>	https://youtu.be/dktnOPfE7Dc?si=hLSiCbynWQRuJ-Is



Good habits and good manners are lifelong assets and one must practice until it becomes a habit. Some of them that you must follow are:

- Please, Thank you, Excuse me and Sorry. Make these four words a habit and see the magic.
- Exercise regularly (yoga, skipping, cycling, running, walking, dancing etc)
- Eat healthy and homemade food. Avoid oily and junk food.
- Drinking lots of water, juices, shakes etc.
- Eat seasonal and juicy fruit.
- Brush your teeth twice a day.
- Do trims your nails often.
- Do not waste water and electricity.
- Keep your surrounding and environment clean. It is a bad habit to throw things out of the window, car, or a balcony.
- Go for a morning walk, talk about things you can see around.
- Play indoor games with your family and friends.
- Spend your time with grandparents.

Also help you parents in doing small jobs like dusting, cleaning the tables, filling water bottles, watering plants etc.



SUMMER VACATION HOMEWORK

MARKING SCHEME

CRITERIA	MARKS
Timely Submission	2
Neatness and Presentation	2
Completion of worksheets	2
Creativity and Effort	2
Understanding of the work	2
Marks Obtained	/ 10
