

## **Winter Vacation Assignment (Class- V)**

### **Subject- English**

#### **Q.I Read the passage carefully and answers the questions carefully:**

Language is the way we talk and share our thoughts. As we learn and grow, we become better at reading, writing, and speaking. Reading introduces us to new ideas, stories, and different cultures. It expands our knowledge. Writing allows us to express our thoughts clearly, and speaking helps us become more confident communicators. In addition, we get to explore the world of literature. In literature, stories and poetry use words to create pictures. The literature conveys emotions, and delivers important messages. It's like a journey through the world of language, where words become our friends and tools to express ourselves and better understand the world. Language is a key that opens doors to knowledge and connection. It's a skill that stays with us throughout our lives. Language enables us to share our experiences, emotions, and ideas with others, making the world a more connected and expressive place.

#### **1. Fill in the blanks.**

i. \_\_\_\_\_ not only expands our knowledge but also introduces us to new ideas.

ii. We use \_\_\_\_\_ to make the world a more connected place.

2. Pick out a word from the passage which is the synonym for “**expresses**”.

3. Pick out a word from the passage which is the antonym of “**contract**.”

#### **4. Answer these questions.**

i. What is the role of writing in communication, as mentioned in the passage?

ii. What is the key that language is described as in the passage?

#### **Q.II Learn the Poem ‘Stopping by the Woods on a Snowy Evening’**

## Subject- हिंदी

प्रश्न 1- नीचे दिए गए अनुच्छेद को पढ़कर क्रिया शब्दों पर गोल लगाइए -

कंप्यूटर नेटवर्क ने सारे संसार को आपस में जोड़ दिया है। आज घर में बैठे हुए ही संसार के किसी भी कोने में बैठे व्यक्ति से बात करना, संदेश भेजना आदि कंप्यूटर के कारण ही संभव हुआ है। अब फाइल का स्थान पेनड्राइव ने ले लिया है। कंप्यूटर से रोगों का भी शीघ्र पता लगाया जा सकता है। यह कहना गलत नहीं होगा कि कंप्यूटर आज के युग की आवश्यकता बन गया है।

प्रश्न 2-निम्नलिखित वाक्यों में प्रयुक्त क्रियाएँ अकर्मक है या सकर्मक लिखिए

1. बच्चे मिठाई खारहे हैं-----

2. अध्यापक ने सभी बच्चों को इनाम दिया।-----

प्रश्न 3-निम्नलिखित वाक्यों में प्रयुक्त काल के भेद लिखिए

1. दर्जी कपड़े सिलता है।-----

2. वह कल लंदन जाएगा।-----

3. वह नौकरी करता था।-----

प्रश्न 4-माँ ने मुझसे से कहा था - "आज तुम खेलने मत जाना" वाक्य में रेखांकित सर्वनाम का भेद है

1. मध्यम पुरुष ( )

2. उत्तम पुरुष ( )

3. अन्य पुरुष ( )

प्रश्न 5-विशेषण शब्दों को उचित विशेष्य से मिलाइए

(क) नटखट

(1) इंद्रधनुष

(ख) रंग- बिरंगा

(2) गेंद

(ग) गोल

(3) रसगुल्ला

(घ) खट्टा

(4) बंदर

(ङ) मीठा

(5) संतरा

प्रश्न 6-वाक्य में आए रेखांकित क्रिया विशेषण के भेद लिखिए

1. मैं दिल्ली कल जाऊँगी।-----

2. घोड़ा धीरे-धीरे चल रहा है।-----

## Subject- EVS

I) Choose the correct answer-

1. Work done = Force x \_\_\_\_\_.

a. Distance

b. Energy

c. Velocity

d. Speed

2. What simple machine uses a slanted surface that connects of lower level to a higher level?

a. Inclined plane

b. Screw

c. Wedge

d. Lever

3. Manvar is –

a. A Mountain range

b. An Oasis

c. A Spring

d. A Delt

4. A large area of sea almost surrounded by land-

a. Bay

b. Gulf

c. Oasis

d. Dunes

5. The part of the peninsular plateau that lies to the south of the Vindhyas and Satpuras is called-

a. The Deccan Plateau

b. The central highland

c. The Aravalis

d. None

## II) Match the columns-

1. Delta of the Ganga

2. Lever

3. Wedge  
opener

4. Inclined plane

5. Hills of the north-eastern states

6. A magnifying lens

i) To load a truck with boxes of goods

ii) cut a fruit

iii) Opening a bottle using a bottle

iv) convex

v) Sundarbans

vi) Purvachal

## III) Answer these questions-

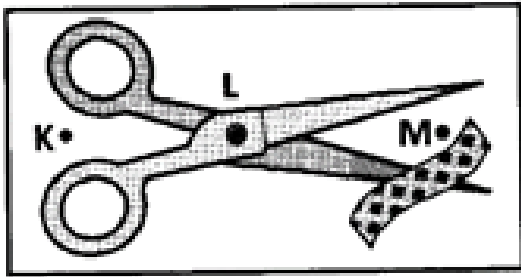
1. Why the hill roads made to wind around hills? Draw a neat and clear diagram of a SCREW.

2. 'Glaciers are sources of many great Indian rivers.' Explain.

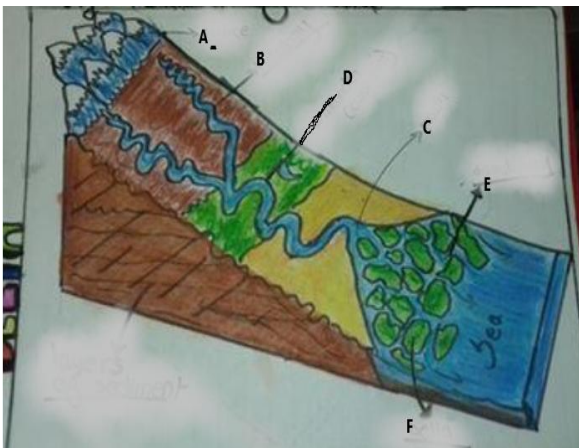
3. Draw a neat, well labelled and coloured diagram of the different climatic zones of the earth. Write about any one climatic Zone.

4. Draw any Lever and show F, E and L.

IV) The figure shows a pair of scissors. Which points marked K, L and M represent the fulcrum, effort and load?



IV) Label the given diagram -



### Subject- Mathematics

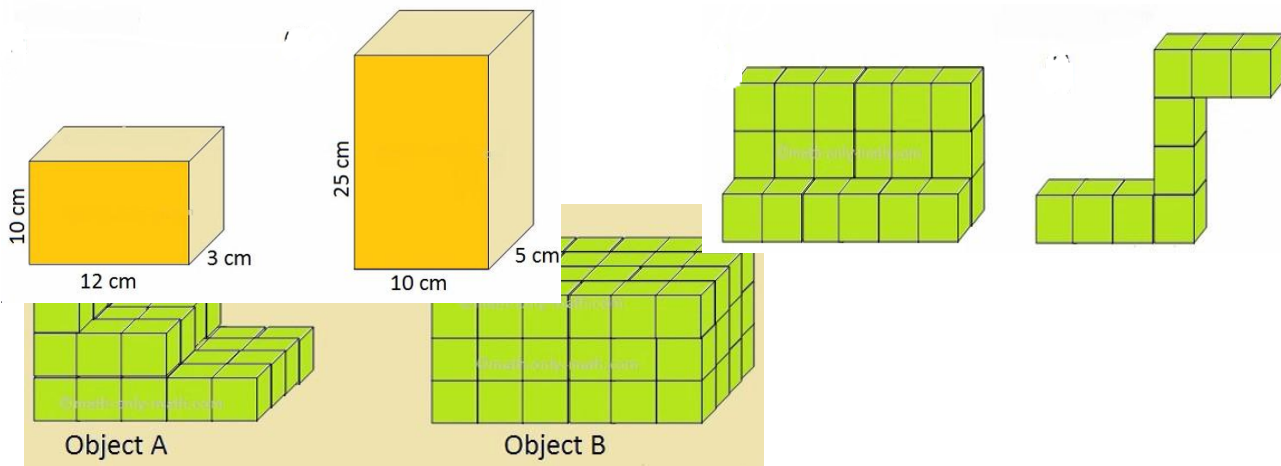
Q1. Fill in the blanks:

- a) The volume of a 1 cm cube is \_\_\_\_\_
- b) The volume of cube is \_\_\_\_\_ x \_\_\_\_\_ x \_\_\_\_\_
- c) Volume of cuboid whose dimensions are length 48cm, breadth 36cm and height 4cm is \_\_\_\_\_
- d) Volume of the cube whose each edge is 91cm is \_\_\_\_\_
- e) The space occupied by a solid is its \_\_\_\_\_

Q2. A cube with an edge of 7 cm and a cuboid measuring 7 cm x 4 cm x 8 cm are kept on a table. Which shape has more volume? By how much?

Q3. A brick measures 15 cm in length, 8 cm in breadth and 5 cm in height. How many bricks will be used to make a wall of length 15 m, breadth 10 m and height 8 metres?

Q4. Look at the figure given below and find its volume.



Q5. Find the volume by using formula.

- a) A cube with side 2.9 cm
- b) A cuboid with length 15 cm, breadth 4.6 cm and height 1.3 cm
- c) A sugar cube with side 5.5 cm
- d) A brick with dimensions 16 cm x 8 cm x 4 cm

Q6. Find out the sum of the number series 99, 100, 101,.....190 with the help of the Maths Trick taught to you during the Special Assembly conducted on the occasion of National Mathematics Day.