

Work Sheet	
Class: VI	Topic: PT4
Subject: Social Science	

I. Choose the correct answer from the following.

1. Who wrote the famous biography Harshacharita?
 - a) Kalidas
 - b) Aryabhata
 - c) Banabhatta
 - d) Harishena
2. Meaning of Maha-danda-nayak is
 - a) Minister of war and peace
 - b) Chief judicial officer
 - c) Chief banker
 - d) Chief craftperson
3. In which part of the India lies the Great Indian Desert?
 - a) Northern
 - b) Southern
 - c) Eastern
 - d) Western
4. Which ocean is triangular in shape?
 - a) Pacific
 - b) Indian
 - c) Atlantic
 - d) Arctic
5. The combined landmass Europe and Asia is called:
 - a) Asia
 - b) Africa
 - c) South America
 - d) Eurasia
6. Community protest is the medium of:
 - a) To raise the problem which affects them
 - b) To get the financial benefit
 - c) Both (a) and (b)
 - d) None

II. Fill in the blanks.

1. The leaders who provided the kings with troops were called as _____.
2. Ashoka pillar found at _____ has inscriptions about Samudragupta.
3. Polyps are very small _____ animals.
4. The solid portion of the earth on which we live is called the _____.
5. In the urban areas _____ is the body who is responsible for developmental work.
6. The delta formed by the Ganga and Brahmaputra

III. Give one word answer for the following.

1. A famous poetry book Abhijnana Shakuntalam was written by:
2. In which sea is Andaman and the Nicobar Island located?
3. The ocean which is named after a country.

4. The major constituent of atmosphere by per cent is:
5. Who should be contacted by the people when problems are within a ward?
6. Who is in charge of all the police stations in a district?

IV. Answer the following questions in 20 to 30 words:

1. Mention three authors who wrote about Harshavardhan.
2. Which two major river fall into the Arabian sea?
3. What are the four major domains of the earth?
4. Write a short note on hydrosphere.
5. Why is Lakshadweep known as a coral island?
6. What is the work of police?
7. Who is Municipal councilor?
8. What do you mean by Sangam literature?

V. Answer the following questions 60 to 80 words:

1. How does the Samudragupta's Prashasti describe him?
2. What is global warming?
3. Explain the three local assemblies as mentioned in the inscription of pallavas.
4. Mention the three parallel ranges of Himalayas.
5. What is the work of Tehsildar?
6. How does the Municipal Corporation earn the money to do its work?
7. List four ways in which the work of the Municipal Corporation affects the life of a city dweller?

8. Discuss the reasons why the Chinese pilgrims came to India?

VI. Answer the following questions in 100 to 120 words:

1. How is atmosphere important for us?
2. Who was the writer of Samudragupta's prashasti? Describe Samudragupta's policies towards the different kind of ruler.
3. Give an account of the Northern Indian Plains.
4. Distinguish between Western and Eastern Ghats.
5. List the five importance of Mathura.
6. Make a list of the occupations of the people who lived within the Mauryan empire.
7. What were the main teachings of Mahavira?
8. Describe the work of Patwari.

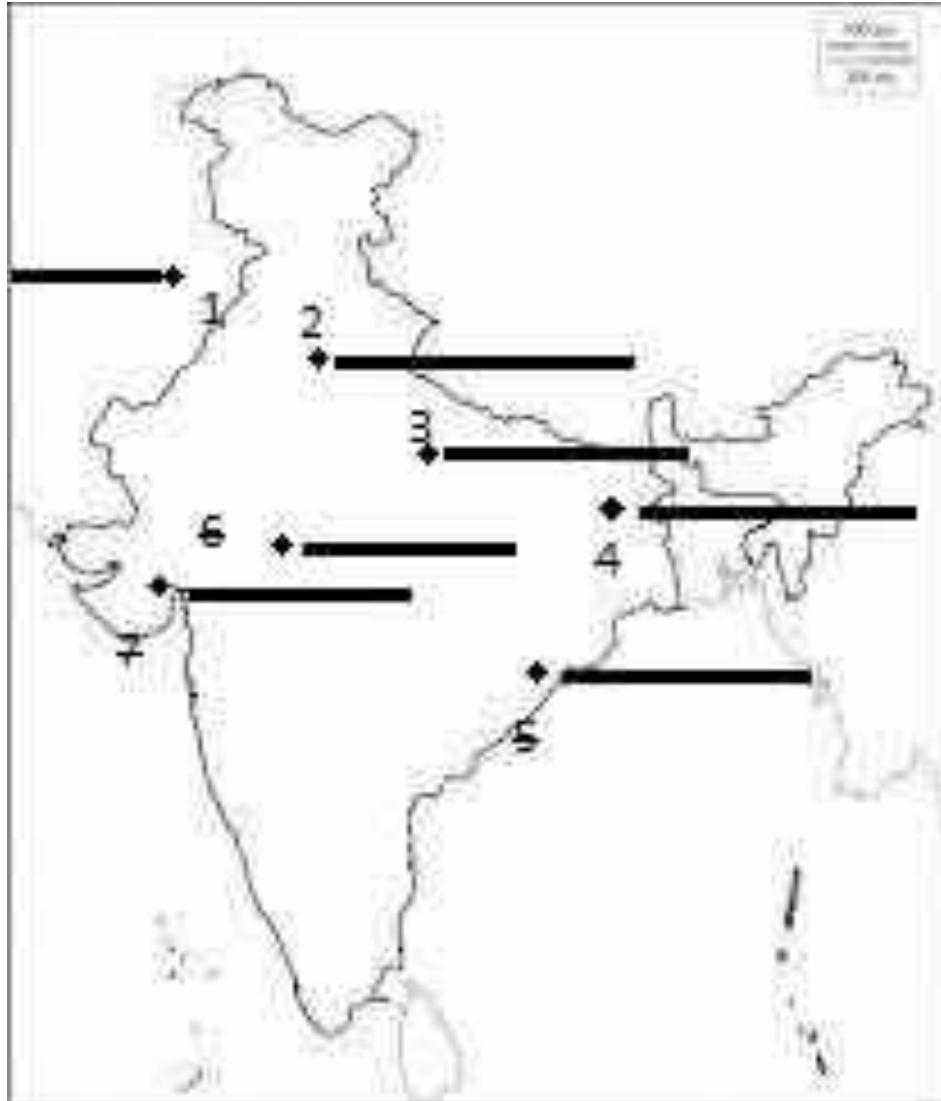
VII. Look at the pictures given below and answer the following.



- A) Which Gupta ruler was poet and played Veena?
- B) Who wrote his Prashasti and how he describes him?

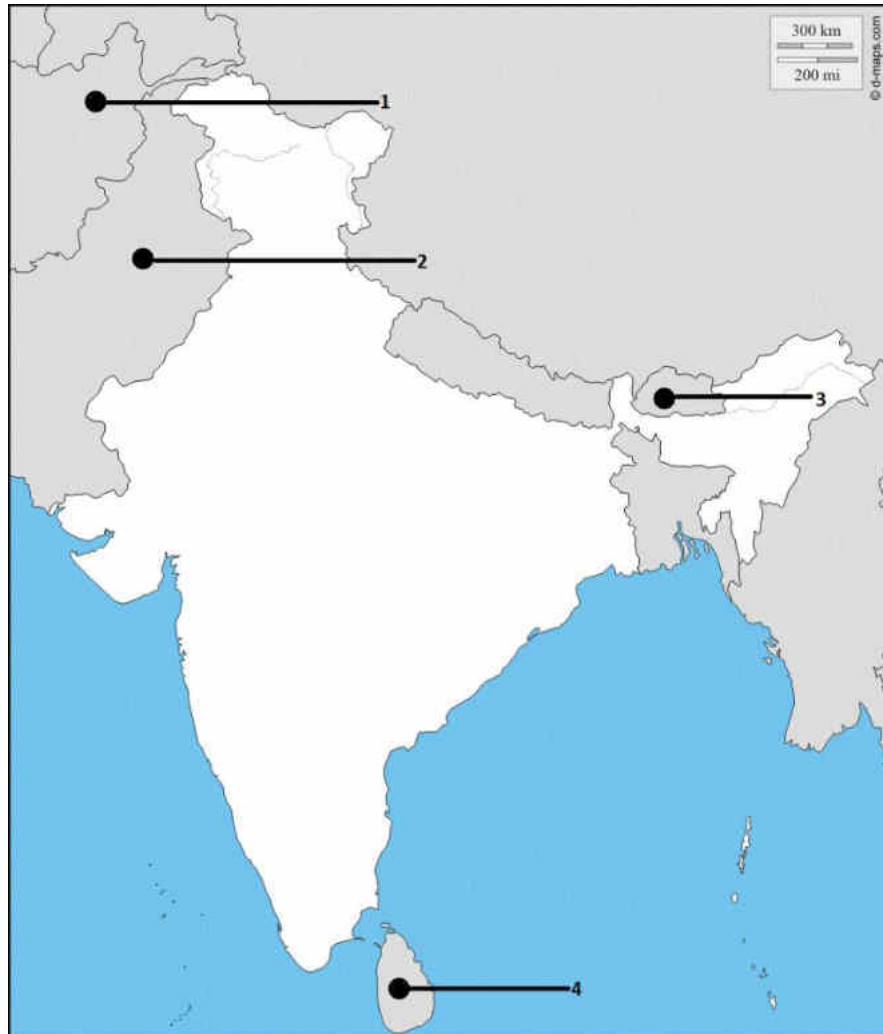
VIII. Draw a neat and labeled diagram of layers of atmosphere.

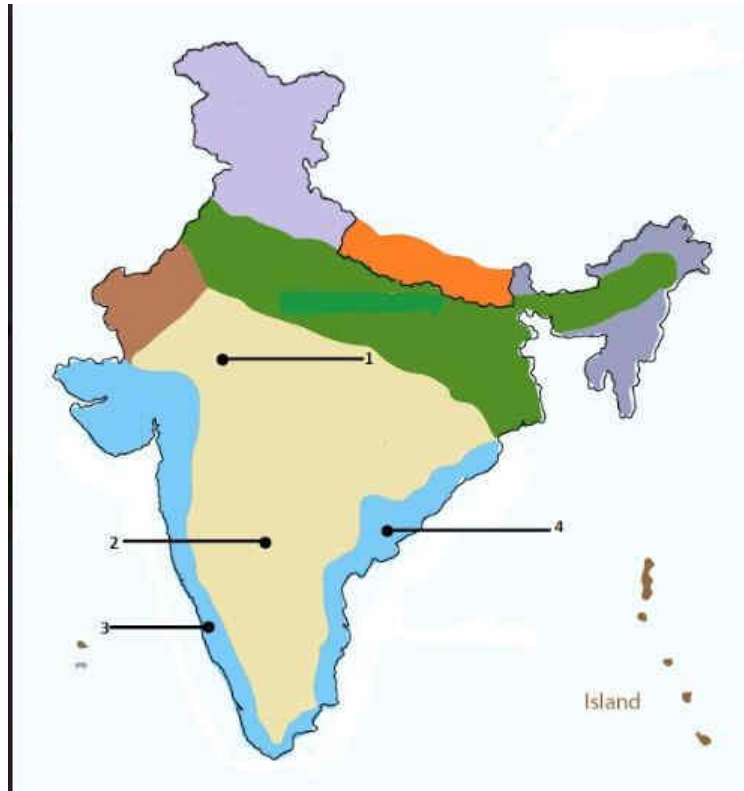
IX. Map work



- a) Harshavardhan became king of this place after the death of his father and brother.
- b) Adjacent to modern day Patna, was a city in ancient India.
- c) An ancient city located in Gujarat was the capital city of the Maitraka Dynasty.
- d) Harshavardhan's brother in law was the ruler of this city.
- e) The city was a gateway to the northwest.
- f) It was an ancient name of Odisha.
- g) It was a city that laid on the route from the north to south India. Merchants, officials, craftpersons probably lived here.

- h) Look at the map given below and identify the neighboring countries of India in North, North-west and South which shares the land boundaries with India.





1. It is the oldest folded mountain of India located in the North-western part of the country.
2. This plateau land in southern India is located between Eastern and Western Ghats.
3. This Ghat is almost continuous and borders the Deccan plateau from the west.
4. This Ghat is broken and uneven and borders the Deccan plateau from the east.

X. Read the paragraph given below carefully and answer the following Questions.

Several poor people in the city work as domestic servants as well as work for the Corporation, keeping the city clean. Yet the slums in which they live are quite filthy. This is because these slums seldom have any water and sanitation facilities. The reason often given by the Municipal Corporation is that the land in which the poor have set up their homes does not belong to them and that slum-dwellers do not pay taxes. However, people living in middle-class neighbourhoods pay very little in taxes compared to the amount of money the corporation spends on them in setting up parks, street lighting facilities, regular garbage collection etc. Also, as you read in this chapter, the property taxes collected by the Municipality makes up only 25-30 per cent of its money.

1. Why do you think it is important that the Corporation should spend more money on slum localities?

2. Why is it important that the Municipal Corporation provide the poor in the city with the same facilities that the rich get?

XXXXX