

CLASS-I	TOPIC
SUBJECT-MATHS	Numbers & Addition

Q-1 Write the number names.



24 -

30 -

49 -

38 -

Q-2 Fill in the missing numbers.



Q-3 Fill in the blanks of each crossword puzzle to make

The addition equations true.


The image shows two crossword puzzles, each with three red ladybug illustrations. The top puzzle consists of three intersecting equations:

- A horizontal equation: $\square + 3 = 4$
- A vertical equation: $0 + \square = 9$
- A horizontal equation: $2 + \square = \square$

The bottom puzzle consists of four intersecting equations:

- A horizontal equation: $5 + \square = 7$
- A vertical equation: $4 + \square = \square$
- A horizontal equation: $3 + \square = \square$
- A horizontal equation: $\square + 1 = \square$

Q-4 Activity- Follow the instructions and colour the flower pot accordingly.



1 - red, 2 - orange, 3 - yellow, 4 - pink, 5 - green, 6 - brown

