

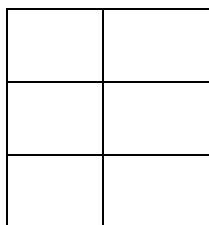
<b>CLASS-I</b>	<b>TOPIC</b>
<b>SUBJECT-MATHS</b>	<b>SUBTRACTION</b>

**Q-1 Word problems-**

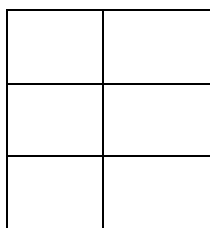
**(a) - You have 7 cookies and you ate 2 of them.  
How many cookies are left with you ?**



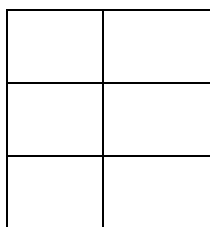
**(b) There were 9 children in the classroom, 3 children went to the library. How many children were left in the classroom?**



**(c) Rahul had 8 chocolates, he gave 2 chocolates to his sister. How many chocolates are left with him?**



**(d) Soham had 9 books. He returned 6 books to the library. How many books are left with him?**



**Q-2 Subtract 3 from each number.**

<b>-3</b>	<b>5</b>	<b>6</b>	<b>7</b>	<b>8</b>	<b>9</b>

**Subtract 1 from each number.**

<b>-1</b>	<b>3</b>	<b>4</b>	<b>5</b>	<b>6</b>	<b>7</b>

**Q-3 Fill in the blanks with + or – sign.**

(a)  $5 \square 2 = 7$

(b)  $9 \square 3 = 6$

(c)  $8 \square 4 = 4$

(d)  $6 \square 2 = 8$

(e)  $7 \square 7 = 0$

(f)  $3 \square 3 = 6$



