

CLASS NOTES

Class: IV

Topic: Play with Patterns
Chapter-10

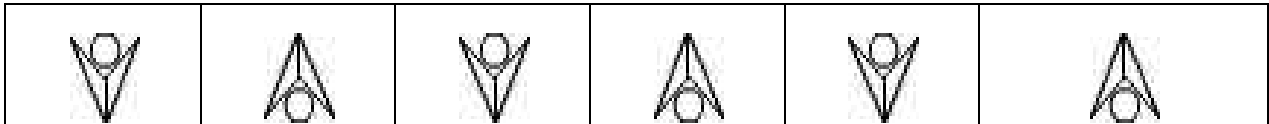
Subject: MATHS

Note: Write the given work in maths copy.


Pattern: A pattern is a repeated arrangement of numbers, shapes and colours and so on. The pattern can be related to any of the event or object. If a set of numbers are related to each other in specific rule then the rule or manner is called a pattern.

Q.1 Make 3 different patterns using this  block.


Pattern 1:



Pattern 2:




Pattern 3:



Q.2 Complete the patterns given below:

(a)



(b)

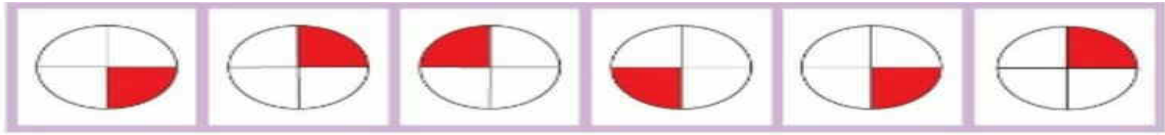


Solution:

(a)



(b)



Q.3 Complete the pattern given below:



Solution:



Q.4 Make pattern using letters-A, B, C in the box so that no letter comes twice in any line.

Solution:

A	B	C
C	A	B
B	C	A

The above content has been prepared absolutely from home.