

Class Notes

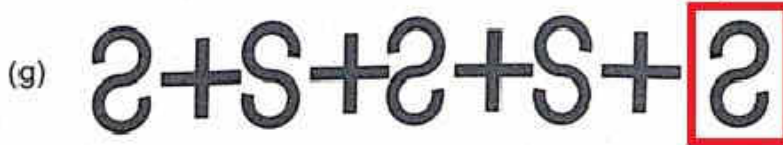
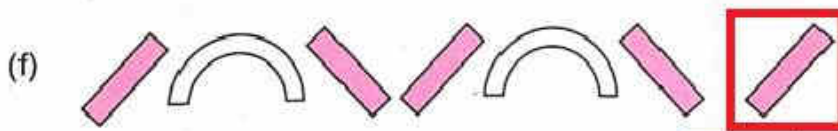
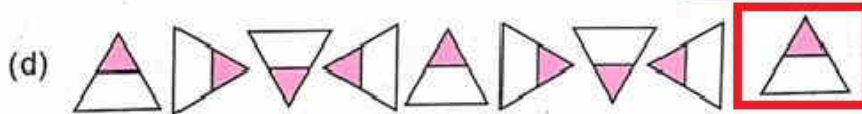
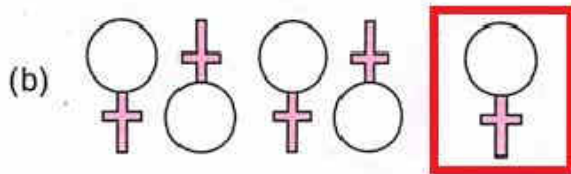
Class: II

Topic: **Chapter-5**
PATTERNS

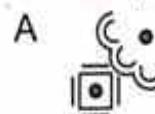
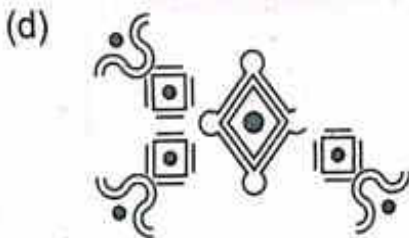
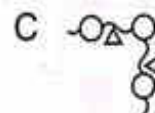
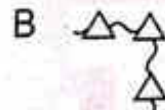
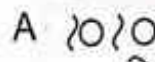
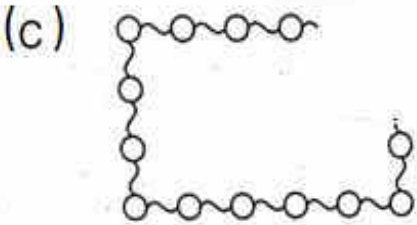
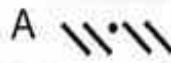



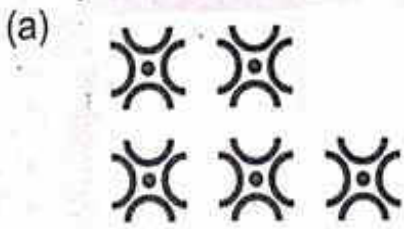
Subject: Mathematics


Do these in your MATHS WORKBOOK (Page no. 30 to 32)

1. Find the pattern and fill in the blanks:



2. Find the piece to complete the pattern:



Using the basic pattern in different colours.  make 3 different patterns and colour them



1. Complete the following number patterns:

(a)  24 28 32 36 40 44 48 52


(b)  42 45 48 51 54 57 60 63

(c)  35 40 45 50 55 60 65 70

(d)  56 60 64 68 72 76 80 84

(e)  18 28 38 48 58 68 78 88

(f)  20 18 16 14 12 10 8 6

(g)  40 36 32 28 24 20 16 12

(h)  84 74 64 54 44 34 24 14

The Above Content has been Prepared Absolutely from Home