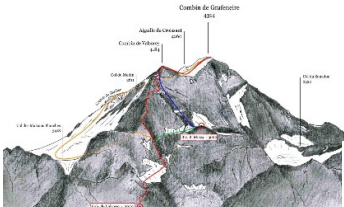

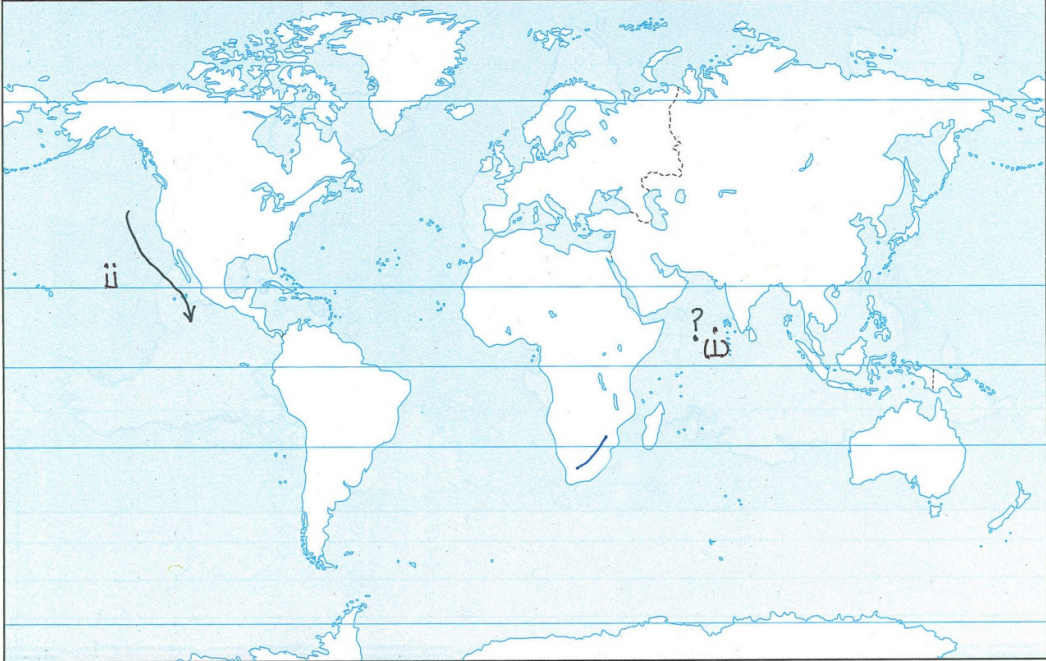


SAMPLE QUESTION PAPER
CLASS XI, GEOGRAPHY

1	<p>Which planet has the maximum density?</p> <p>A. Jupiter B. Earth C. Mars D. Venus</p>	1
2	<p>Who among the following propounded the Nebular Hypothesis?</p> <p>A. Chamberlin B. Artur Homes C. Alfred Wegner D. McKenzie, Parker and Morgan</p>	1
3	<p>Which of the following mineral is non-metallic?</p> <p>A. Copper B. Lead C. Mica D. Tin</p>	1
4	<p>Which pair is wrongly matched?</p> <p>A. Slow movement ----- Landslide B. Rapid movement ---- avalanches C. Orogenic forces ----- Plate tectonics D. Epirogenic forces ----- vertical upliftment</p>	1
5	<p>Identify the erosional feature made by glacier</p> <p>A. Moraine B. V-shaped valley C. Arete D. drumline</p> 	1
6.	<p>Which of the given statement is not correct?</p> <p>A. Troposphere is the densest layer B. In Stratosphere the temperature increases with height C. Meso sphere helps in radio communication D. Ozone layer is found at the height of 50km</p>	1
7	<p>The process of heating up of land through horizontal movement of heat is called</p> <p>A. Conduction B. Convection C. Advection</p>	1

	D. Radiation													
8	<p>What kind of climate is expressed by the BSh?</p> <p>a. Tropical dry b. Tropical monsoon c. Subtropical Dry Steppe d. Mid Latitude Climate</p>	1												
9	<p>Which of the following is included in the secondary consumers?</p> <p>A. Carnivores B. Herbivores C. Decomposers D. Autotrophs</p>	1												
10	<p>Complete the flow chart</p> <table border="1" style="margin-left: auto; margin-right: auto;"> <tr> <td colspan="6" style="text-align: center;">PHYSIOGRAPHIC DIVISIONS OF INDIA</td> </tr> <tr> <td style="text-align: center;">The Norther n Mounta ins</td> <td style="text-align: center;">?</td> <td style="text-align: center;">The Indian Desert</td> <td style="text-align: center;">The Peninsu lar plateau</td> <td style="text-align: center;">?</td> <td style="text-align: center;">The Island</td> </tr> </table>	PHYSIOGRAPHIC DIVISIONS OF INDIA						The Norther n Mounta ins	?	The Indian Desert	The Peninsu lar plateau	?	The Island	1
PHYSIOGRAPHIC DIVISIONS OF INDIA														
The Norther n Mounta ins	?	The Indian Desert	The Peninsu lar plateau	?	The Island									
11	<p>Musi, Tungabhadra, Bhima are the tributaries of</p> <p>A. Kaveri B. Krishna C. Mahanadi D. Godavari</p>	1												
12	<p>Identify the drainage pattern (pic will be given)</p> <p>A. Dendritic B. Trellis C. centripetal D. Radial</p> <div style="text-align: center;">  </div>	1												
13	<p>During which period the South West Monsoon retreats</p> <p>A. June to September B. October to November C. December to January D. February to March</p>	1												
14	<p>Silver fir, Deodar and Chestnut are found in</p> <p>A. Tropical Evergreen</p>	1												

	<p>B. Tropical Deciduous C. Montane vegetation D. Swamp</p>	
15	<p>Which among the following has an international acclamation? A. National Parks B. Bio reserve C. Sanctuary D. Zoological Parks</p>	1
16.	<p>Which of the following is a characteristic of the black soil? A. clayey in nature B. rich in organic mater C. contains nodules of calcium carbonate D. moisture holding capacity is low</p>	1
17.	<p>Tropic of Cancer does not go through A. Chhattisgarh B. Jharkhand C. Tripura D. Madhya Pradesh</p>	1
18	<p>Which city will have the longest day in June 21st? A. Nagpur B. Chennai C. Kolkata D. Srinagar</p>	1
19	<p>Location of India at the head of Indian Ocean has been a great advantage. Elaborate</p>	3
20	<p>Discuss the global heat balance Or Discuss in detail the process of heating of the atmosphere</p>	3
21	<p>Explain different forms of condensation</p>	3
22	<p>How the Himalayan rivers are geomorphologically different from the Peninsular rivers.</p>	3
23	<p>What are the natural and man-made factors of climate change? How is the international community trying to combat with this situation?</p>	5
24	<p>Monsoon has a great impact on the social and economic life of India. Elaborate OR Discuss the atmospheric conditions experienced in different parts of India during the hot weather season.</p>	5
25	<p>In which year the National Forest Policy was formulated? What are the objectives of the forest policy? OR Discuss the characteristics of Tropical Thorn forest. How does the</p>	5

	vegetation adapt to the climatic conditions?	
26	<p>What are the forces causing ocean currents? Explain in detail</p> <p style="text-align: center;">OR</p> <p>What are the vertical and horizontal movement of the ocean water? What are the forces causing such movement?</p>	5
27	Discuss the importance of soil. Different parts of India suffer from soil erosion. what measures can be taken to preserve the soil?	5
28	Discuss the economic role of bio diversity. What factors are responsible for the loss of bio diversity.	5
29	 <p>i. Draw and show the location of</p> <ol style="list-style-type: none"> a. Tropical High-Pressure belts b. Polar cell <p>ii. Identify the</p> <ol style="list-style-type: none"> a. Ocean current b. sea 	4
30	<p>Locate any six features in the supplied outline map of India</p> <ol style="list-style-type: none"> i. Region of Tropical rain forests in Peninsular India ii. highest peak of Himalayas iii. Nanda Devi bio reserve iv. Zone of laterite soil v. One river that doesn't form delta vi. Sambhar lake vii. Satpura range 	6