

PERIODIC TEST - 4, 2018-19

ENVIRONMENTAL STUDIES

Time – 1:30 hrs.

Class - III

M.M. – 40

Name of the student _____ Section _____ Date-15.02.2019 (Friday)

Q.1 Tick the right answer. (1×5=5)

- i) Andaman and Nicobar and Lakshadweep are –
a) island b) deserts
- ii) The festival celebrated at the end of the month of Ramzan is –
a) Id-ul-Fitre b) Id-ul-Zuha
- iii) Boat races are held during –
a) Onam b) Baisakhi
- iv) As the earth revolves around the sun, the part of the earth that comes closer to the sun has –
a) summer b) winter
- v) The moon is earth's –
a) planet b) satellite

Q.2 Fill in the blanks. (1×5=5)

- i) There are _____ states and _____ union territories.
- ii) Parsis pray at the _____.
- iii) The book of rules by which a country is run is called its _____.
- iv) We were ruled by the British before _____ August _____.
- v) The blanket of air around the earth is called the _____.

Q.3 Write 'True' or 'False' for following statements. (1×5=5)

- i) The state governments have their offices in New Delhi.
- ii) We celebrate Republic Day of India on 26th January every year.
- iii) Jains celebrate Mahavir Jayanti.
- iv) Dussehra is the first day of a ten day festival.
- v) A heavenly body with light of its own is called a satellite.

Q.4 Match the following - (1×5=5)

- i) Revolution of the earth a) constellation
- ii) The birthday of ten Sikh Gurus b) 2nd October
- iii) Prime minister and other ministers c) 365 days 6 hours
- iv) Orion and Scorpius d) Guruparavs
- v) Gandhi Jayanti e) Union government

Q.5 Answer the following questions. (Any 5)

(2×5=10)

- i) Which part of India is surrounded by the sea ?
- ii) Why does the moon seem to change its shape ?
- iii) Name one of the things that powders rocks into soil.
- iv) What does harvest mean ? Name two harvest festivals.
- v) What is a republic ?
- vi) Why do things on the earth not fall off it ?

Q.6 Draw a diagram showing rotation of the earth.


(1×4=4)

Q.7 Identify the following pictures.


(1×6=6)




(a)



(b)




(c)



(d)



(e)



(f)

