

Model Paper

Subject - English

Class- v

Section A – Reading (15 marks)

Section B – Writing (20 marks)

Section C – Grammar (20 marks)

Section D – English Reader (25 marks)

Section A

Reading (15 marks)

A1. Read the passage given below and answer the questions that follow:

Love Trees

Do you know that trees also breathe like us? In fact, they make it possible for us to breathe. This is so, because, they breathe out the oxygen which we inhale. But that is not the only use of trees. Trees also provide food to all living beings. They give us fuel too. Many trees have medicinal uses as well.

Leaves of trees like the palm are used by some people for thatching the roofs of their homes.

But we pose a threat to trees. Isn't it shocking that even though trees help us in various ways, yet we cut them down? What we don't realise is that our existence would be in great danger if we continue to cut trees. It will not only result in disturbing the oxygen cycle, but it will also affect the food supply. Trees help in holding together the fertile layer of soil and cutting them down may result in the erosion of this layer.

Trees are our best friends and lifeline. We should love them and protect them to protect ourselves.

Q1.Fill in the blanks:

- Trees breathe out the _____ which we inhale.
- Many trees have _____ uses.
- Leaves of _____ trees are used for thatching the roofs of homes.
- Trees help in holding together the fertile layer of _____
- Trees are our best friends and _____

A2. Read the passage given below and answer the questions that follow.

The Honest Boy

'Boys, I want you to take down these ten questions for homework. I will look at your answers on Monday', said the teacher.

One of the boys, Gopal, went home and started to do his homework. He wrote down the answers to nine of the questions. But he did not know the answer to the tenth question. He tried and tried but it was no use – he could not do it.

Then Gopal had an idea. He knew a boy who was in a higher class. So he went to him and asked for help. The older boy helped him.

On Monday, the teacher corrected the homework. Only one boy had all ten answers correct. His name was Gopal. The teacher was very happy.

'Very good, Gopal. Here is a prize for your excellent work.' 'But, sir', said Gopal, I don't deserve the prize.'

'Why?' The teacher was puzzled.

'Sir,' continued Gopal, 'I didn't do it all by myself. I asked a friend to help me with the last question. 'His face was pale and his voice trembled.

The teacher looked at Gopal for a minute without speaking. Then he smiled broadly. He patted the boy on the shoulder and said, "The prize is still yours, Gopal. Only now it is a prize for honesty. I am very proud of you my boy'

The boy was Gopal Krishna Gokhale. He grew up to be a very wise man, a great leader and a freedom fighter. The Indian people as well as the British who ruled India at that time respected him Mahatma Gandhi too asked Gokhale for advice at various times.

I . State whether the following statements are true or false.

- a) The teacher had given ten questions as homework.
- b) Gopal didn't know the answer of the first question.

II. Fill in the blanks by choosing the correct word from the passage.

- a) On _____ the teacher corrected the homework.
- b) The prize given to Gopal was the prize for his _____

III. Write the past tense form of the following verbs.

- a) Say _____ c) correct _____
- b) Go _____ d) write _____

IV Answer the following questions

- a) Why didn't the teacher punish Gopal?
- b) How many questions were given as homework?
- c) What difficulty did Gopal face while doing his homework?

V) Write four adjectives given in the passage.

- a _____ b _____
- c _____ d _____

Section – B
Writing (20 Marks)

B1. Write on any one of the following

- a) You love playing cricket and want to join the Delhi and District Cricketing Association (DDCA). Write a letter to the secretary requesting him to inform you of the procedure to join the Association.

(OR)

- b) Write a letter to the principal of your school seeking his permission to participate in an inter-school painting competition.

B2.

a) Imagine you are the little bird in the story. Write a diary entry about your experience in the forest.

(OR)

b) Imagine you are the grandfather in the story 'Tiger in the house'. Write a diary entry about your experience in the zoo.

B3. Write a paragraph on any one of the following topics.

- a) Value of time
- b) Importance of games and sports.

Section C
Grammar (20 marks)

C1. Fill in the blanks with suitable pronouns.

- a) My parents like listening to music. They say _____ refreshes _____.
- b) Our teacher asked all of _____ to be quiet when _____ were shouting.

C2.

A) Unscramble the letters in brackets and write the adjectives.

- a) a (camislu) _____ concert.
- b) An (gaminairy) _____ scene

B) Circle the correct adjective to describe each animal.

- a. as (faithful/good/happy) as a lark
- b. as (prickly/soft/hairy) as a gorilla

C) Rewrite the phrases in three words, using suitable adjectives.

- a. A story that is full of interest.
- b. A person who has great wealth.

C3.

A) Complete the following table.

Positive	Comparative	Superlative
Wise		
	Finer	

B) Write sentences in the positive, comparative and superlative degrees for each set of statements.

- a. Dinesh's height is 145 cm.
- b. Prakash's height is 150 cm.
- c. Karthik's height is 154 cm.

C4.

A) Unscramble the letters and fill in the blanks

- a. The clock was (ctnigki) _____ on the mantelpiece.
- b. The coins ere (ngijnigl) _____ in her pocket.

B) Rewrite the following sentences using the opposites of the verbs given in bold

- a. He **joined** the two pieces of rope.
- b. She **gained** a lot of weight.

C) Choose the correct action word and complete the pair of words

- c. A pianist (rings /keys/plays) the piano.
- d. Aeroplanes (buzz /zoom/roar).

C5.

A) Underline the correct verb

- a. Is/Are there any children in the playground.
- b. A vase of roses is/are on the window sill.

B) Fill in the blanks with the correct form of the verb given in the brackets.

- a. How many times _____ (has/have) your friends read this book?
- b. The United States of America _____ (is/are) a big country.

C) Form sentences by adding a predicate beginning with is/are/was/were/has/have.

- a. Every book _____.
- b. Two of the books _____.

C6. Pick out the verbs and objects and write them in the correct columns.

- a. Suman is sweeping the floor.
- b. The vase broke.
- c. The bell rang.
- d. The men are building a bridge.

	Transitive verbs	Objects	Intransitive verbs
A			
B			
C			
D			

C7.

A) Complete these sentences using meaningful phrases.

- a. Birds begin to sing _____
- b. We listen to the radio _____

B) Fill in the blanks with phrases and complete the proverbs

- a) Charity begins _____
- b) It's no use crying _____

C8.

A) Underline the subjects in the sentences

- a. The painter climbed up the ladder.
- b. They are waiting at the bus stop

B) Underline the predicate in each sentence

- a. The mangoes are fresh.
- b. Uncle will visit us tomorrow.

Section D

English Reader (25 marks)

D1. Read the sentences and answer the questions that follow. (Any one)

- 1. It was a moment of great satisfaction to him.
 - a. Whom does the word 'him' refer to ?
 - b. Why was the moment satisfying to him?

(OR)

- 2. Where the knowledge is free.
Where the world has not been broken up into fragments.
 - a. What does the poet mean by 'where knowledge is free'?
 - b. What was the world broken up with?

D2. Answer the following questions (Any 4)

- a. What happened when Grandfather visited the zoo to meet Timothy?
- b. What was the motto of 'Col. Vasanth Venugopal'?
- c. What tells you that he was a simple man at heart?
- d. How can we become richer 'than a prince'?
- e. Why does the poet call habits 'dead'?

D3. Answer the following questions (Any one)

- a. Why did Grandfather decide to transfer Timothy to a zoo?
- b. How did Col. Vasanth show great courage in the Uri encounter?

D4. Answer the following questions (any one)

- a. Do you think animals should be kept in zoos? Give reasons for your answer.
- b. Write three things that you do for the betterment of your society.

D5. Fill in the blanks with the correct option.

- a. Grandfather _____ (smacked/stroked) the tiger's mouth when it growled.
- b. Timothy became fierce at the age of _____ (three/six) months.

D6. Tick the correct option.

- a. The cold North wind was kept away by the
 - i) Pine tree ii) oak iii) Spruce
- b. Birds fly south in
 - i) Winter ii) summer iii) spring

D7.

1. Choose the correct abstract noun from each of the following

- a. Obsess
 - i. Obsessive _____ ii) obsession _____ iii) obsessiveness _____
- b. Identify
 - i. Identify _____ ii) identifying _____ iii) identifiable _____

2. Write the compound adjectives by matching the correct words

- a) Well a) Storeyed
- b) kind b) Hearted
- c) Twenty c) known

3. Rewrite these sentences using the ing of the word in brackets.

- a. I enjoyed reading the book you gave me. (interest)
- b. You should wait till the bus stops, then leave your seats. (move)

4. Fill in the blanks with the correct answer.

- a. Please _____ me at the earliest (advice /advise)
- b. The Queen _____ from the carriage. (lighted / alighted)

5. Match the words with their synonyms.

a) freedom	a) logic
b) reason	b) advance
c) forward	c) sections
d) perfection	d) liberty
e) fragments	e) excellence

O. P. JINDAL SCHOOL, RAIGARH (CG) 496 00 1

Phone: 07762-227042, 227293, 227001 (Extn. 49801, 49802, 49804, 49806); Fax: 07762-262613; website: www.opjsrgh.in; e-mail: opjsraigarh@jspl.com

Model Paper Subject – EVS CLASS- V

Q1. Name the following:

(1x5=5Marks)

- Unfortunate happening in nature.
- A person who tests a patient's urine, blood, sputum, stool.
- Plants with soft green stem.
- Shaking or trembling of the earth.
- Part of the plant which helps in reproduction.

Q2. Fill in the blanks:

(1x5=5 Marks)

- _____ is a violent storm occurring near the sea.
- Baby plant gets its food from _____.
- _____ is a silvery liquid used in thermometer.
- _____ is one of the cleanest fuels.
- Strength of earth quake is measured in _____ scale.

Q3. Write True or False:

(1x5=5Marks)

- Malaria is spread by flies.
- There are eight types of blood groups.
- Primary health centre is bigger than primary health sub centre.
- A person suffering from heatstroke should not be given hot drink.
- Tulsi is an example of herb.

Q4. Write the difference between (Any 2)

(2x2=4Marks)

- Tap root and fibrous root.
- Treatment and first aid
- Sprain and fracture
- Communicable and non-communicable disease.

Q5. Define (Any 5)

(1x5=5Marks)

- Environment
- Surgery
- Flood
- Respiration
- Decomposers
- Annuals

Q6. Write short notes. (Any 2)

(3x2=6marks)

- Balance of gases in nature
- Mobile health van
- Effect of modern means of communication on our health

Q7. Choose the right answer

(1 x 5= 5 Marks)

- Tiny holes on leaves through which gases enter and leave are _____.
 - Stomata
 - Chlorophyll
 - Cotyledon

- b) Which has most number of health workers?
 - i. Primary health centre
 - ii. Primary health subcentre
 - iii. Community health centre
- c) The abiotic component of environment is made of
 - i. Microorganisms
 - ii. Plants
 - iii. Water ,air ,soil, sunlight
- d) Animals which eat only plants are:
 - i. Carnivores
 - ii. Herbivores
 - iii. Decomposers
- e) Heart pumps blood carrying carbondioxide to the
 - i. Arteries
 - ii. Lungs
 - iii. Veins

Q8. Match the column

(1x6=6 Marks)

- | | |
|---|--|
| <ul style="list-style-type: none"> 1. Anaemia 2. Arteries 3. Red cross 4. Banyan tree 5. Rickets 6. Tetanus | <ul style="list-style-type: none"> a. Cuts and wounds b. Perennial plant c. Deficiency of iron d. Deficiency of calcium e. Oxygenated blood f. NGO g. Deficiency of Vitamin D |
|---|--|

Q9. Write short answers.(Any ten)

(1x10=10 marks)

- a. What do the kidneys do ?
- b. Name the organs of the nervous system.
- c. What are the three major nutrients?
- d. How does a person get heatstroke?
- e. What is sputum?
- f. What are creepers?
- g. Mention one way in which animals help plants.
- h. Why should we use unleaded fuel?
- i. Name two flood prone states of India?
- j. Name two diseases spread by houseflies.
- k. Write the full form of WHO, UNICEF.

Q10. Explain in a few lines (any 5)

(5x3=15 Marks)

- a. How do leaves prepare food for plants?
- b. Write three ways of reducing air pollution.
- c. How would you help someone who is choking?
- d. How do mosquitoes spread diseases?
- e. How do trees make a place less drought prone?
- f. Why is cutting down forests harmful?
- g. How does exercise help our muscles?
- h. What are the functions of stems?
- i. What are the functions of roots?

Value based Question

(4 Marks)

Q11. Mohit was in the habit of driving very fast. He never paid attention to the traffic signals.

One day as he was rushing towards his office, he met with an accident. He was badly hurt and there was loss of blood. Sohan, a friend of Mohit, decided to donate blood as both of their groups matched. When Mohit gained his sense, he realized his mistake and promised never to repeat his mistake.

- What was Mohit in the habit of?
- How did Sohan help Mohit?
- Why is it necessary to know blood group?
- What lesson do you get from the above passage?

Q12. Draw a neat, well labelled diagram showing the different layers of the earth.

(5 Marks)

Q13. Identify the following pictures on the basis of clues given (5 Marks)


a. Series of small bones which protect spinal cord.



b. Place in hospital where operations are done.



c. Plants with woody, strong stem.



d. Plants with soft, green stem.



e. Walls of stones and earth built on banks of rivers to prevent rivers rushing into the land.



Model Question Paper T2

Time:-3 Hours

(Maths-V)

MM-80

General Instructions:

- Question paper is divided into four sections – A, B, C and D.
- Section A comprises of 20 questions of 1 mark each. All questions are compulsory.
- Section B comprises of 8 questions of 3 marks each. Attempt any 6 questions.
- Section C comprises of 8 questions of 4 marks each. Attempt any 6 questions.
- Section D comprises of 4 questions of 6 marks each. Attempt any 3 questions.
- Draw neat diagrams wherever needed.
- For the questions in section B, C and D, show the calculations in fair.

Section – A

A1. Fill in the blanks with correct answer.

- i) West Bengal is situated towards _____ from Rajasthan.
- ii) A _____ angle is formed at 8 'O' clock.
- iii) One lakh = _____ hundreds.
- iv) Place value of 5 in 4, 52, and 47,888 is _____.
- v) A square with perimeter 20cm has side of _____ cm.

A2. Find the correct option for the following questions.

- i) The angles formed at vertices of a rectangle are ____
(a) 60° (b) 70° (c) 80° (d) 90°
- ii) Which of the following letters will look same after half term?
(a) B (b) Z (c) Q (d) L
- iii) $144 + 251 + 478 =$ _____ $+ 478 + 144$
(a) 144 (b) 251 (c) 478 (d) 36
- iv) One more than 99, 99,999 is _____.
(a) 1 crore (b) 1 lakh (c) 10 crore (d) 10 lakh
- v) Area of a square of side 9 cm is _____.
(a) 90 cm^2 (b) 81 cm^2 (c) 36 cm^2 (d) 9 cm^2

A3. Write True or False.

- i) Perimeter mean with the length of the boundary.
- ii) Mirror image of the letter E will look same.
- iii) The successor of 89,999 is 79,998.
- iv) A right angle measures 180° .
- iv) $1 + 3 + 5 + 7 + 9 = 25$

A4. Match the columns to make correct pairs.

Column A	Column B
(i) $\frac{5}{8}$	(a) $\frac{4}{6}$
(ii) $55 \div 18$	(b) $\frac{14}{18}$
(iii) $18 \div 55$	(c) $\frac{18}{55}$
(iv) $\frac{44}{66}$	(d) $\frac{20}{32}$
(v) $\frac{56}{72}$	(e) $\frac{55}{18}$

Section – B (Answer any 6 questions)

- B1.** Find the value of the angle formed between minute and hour hands at 1 ' O clock.
- B2.** Find the side of a square having area 36 square cm.
- B3.** Rohini had Rs 500, she spent half of it on paying rent of auto and one fourth to buy a gift. Find how much money is left with her?
- B4.** Draw any three words which will look same after half a turn.
- B5.** Write the place value of 6 in the followings.
(i) 5, 26, 35,211 (ii) 8, 75,368 (iii) 6, 35, 82,374
- B6.** Arrange the following in descending order.
(i) $\frac{9}{11}, \frac{9}{4}, \frac{9}{7}, \frac{9}{8}, \frac{9}{17}, \frac{9}{19}$ (ii) $\frac{17}{16}, \frac{11}{16}, \frac{1}{16}, \frac{23}{16}, \frac{5}{16}, \frac{31}{16}$
- B7.** Two cities A and B are 8.5 cm apart in a map. The scale of the map shows 1 cm = 10 km. Find the actual distance between city A and city B.
- B8.** Karim is facing towards North. A Bank is situated towards his right hand side. In which direction the Bank is situated?

Section – C (Answer any 6 questions)

- C1.** Write the following letters after half turn.
a) **V** b) **D** c) **S** d) **K**
- C2.** Shaymli earns Rs 3.50 profit on selling one banana. Find her profit in selling one dozen bananas.
- C3.** Grandfather of Abhay, Rajani, Shyamli and Shilpi distributed Rs 16000 equally among them .Find the share of each of them.
- C4.** Find the perimeter of a square of area 100 square cm.
- C5.** A square and a rectangle have the same area. Side of the square is 12 cm. Find the area of rectangle.

C6. Write the following numbers in expanded form.

(i) 33, 12,252

(ii) 45, 56, 47,367

C7. Convert the following numbers into a palindrome.

(i) 358

(ii) 482

C8. A rectangular wire of length 8 cm and breadth 3 cm is moulded into a square. What is the length of a side of the square made?

Section – D(Answer any 3 questions)

D1. Write any 4, two, three and four digit numbers which will look same after half a turn.

D2. Draw the following on the grid.

(a) A square of perimeter 24 cm.

(b) A rectangle of area 6 sq. cm and perimeter 10 cm.

(c) Kite of area 8 sq. cm.

D3.

(i) Find the length of a rectangle, having breadth 6 cm long and perimeter 40 cm?

(ii) Length of the boundary of a square garden is 20m. A mason wants to make a footpath along the one side of it, what will be the length of the foot path?

D4. i) Write any three equivalent fractions for the following.

(a) $\frac{11}{12}$

(b) $\frac{17}{19}$

ii) Express the following in lowest term:-

a) $\frac{20}{35}$

b) $\frac{80}{125}$

c) $\frac{38}{42}$

D5. Speed of Shravani's car is 45 km/h and of Shiksha's car is 30 km/h. Find out the following.

(i) Whose car will cover 90 km earlier and by how much time early?

(ii) How much distance both of them will cover in 5 hours?

(iii) Shravani drives for 4 hours and Shiksha for 5 hours, who does cover more distance and by how much?

प्रारूप प्रश्न-पत्र २०१७

कक्षा - पाँचवीं

हिन्दी

(खण्ड- अ)

प्रश्न १ निम्नलिखित गद्यांश को ध्यानपूर्वक पढ़कर नीचे लिखे प्रश्नों के उत्तर लिखिए -

केशव पैदा भी नहीं हुआ था, तब से उसके माता-पिता गुजरात से आगरा आकर बस गए थे। बादशाह अकबर उस वक्त आगरे का किला बनवा रहे थे और केशव के पिता को यहीं काम मिल गया। केशव का जन्म भी आगरे में ही हुआ था। उसे गुजरात के पुश्तैनी गाँव जाने का तो मौका ही नहीं मिला। आगरे की गलियाँ और अब सीकरी - बस यही उसका घर था। अब केशव दस साल का था।

प्र. (अ) केशव के माता-पिता कहाँ से आकर आगरा में बस गए थे ?

प्र. (ब) आगरे का किला किसने बनवाया ?

प्र. (स) केशव का जन्म कहाँ हुआ ?

प्र. (द) केशव का घर अब कहाँ था ?

प्र. (च) केशव कितने साल का था ?

प्रश्न २ निम्नलिखित काव्यांश को ध्यानपूर्वक पढ़कर नीचे लिखे प्रश्नों के उत्तर लिखिए -

वह देखो माँ आज

खिलौनेवाला फिर से आया है

कई तरह के सुन्दर-सुन्दर

नए खिलौने लाया है।

हरा-हरा तोता पिंजड़े में

गेंद एक पैसे वाली

छोटी-सी मोटर गाड़ी है

सर-सर चलने वाली

प्र. (क) खिलौनेवाले के बारे में कौन किसे बता रहा है ?

प्र. (ख) खिलौनेवाला किस तरह के खिलौने लाया है ?

प्र. (ग) पिंजड़े में क्या है ?

प्र. (घ) गेंद कितने पैसे की है ?

प्र. (ङ.) इस कविता की कवयित्री कौन है ?

प्रश्न ३ निर्देशानुसार उत्तर लिखिए -

(१) सही विकल्प चुनिए-

(क) सौनगवसैन गांपों राजा थे -

(१) नेपाल के (२) बर्मा के (३) तिब्बत के

(ख) लोनपोगार ने बेटे को लेकर आने कहा -

(१) सौ बोरा गेहूँ (२) सौ बोरा जौं (३) सौ बोरा ज्वार

(ग) दादी के बाल दिख रहे थे -

(१) सेमल की रुई जैसे (२) घोंसले जैसे (३) सेंवई जैसे

(घ) पोंगल का त्योहार मनाया जाता है -

(१) पंजाब में (२) तमिलनाडु में (३) गुजरात में

(ङ.) बालक बनना चाहता है -

(१) कृष्ण की तरह (२) शिव की तरह (३) राम की तरह

(च) माँ ने बच्चे को कितने पैसे दिए -

(१) चार (२) पाँच (३) दो

(छ) केशव नक्काशी कर रहा था -

(१) लकड़ी पर (२) धातु पर (३) पत्थर पर

(ज) पाठ के आधार पर बादशाह अकबर के कितने पुत्र थे -

(१) पाँच (२) चार (३) तीन

(झ) इला सचानी रहती थीं -

(१) सूरत (गुजरात) (२) भोपाल (मध्यप्रदेश) (३) उदयपुर (राजस्थान)

(त) इला ने कशीदा करना सीखा -

(१) माँ और दादी से (२) बहन से (३) नानी से

(थ) पिनकोड संख्या में कितने अंक होते हैं-

(१) पाँच (२) आठ (३) छह

(द) पुराने समय में संदेश भेजे जाते थे -

(१) कबूतर के द्वारा (२) तोते के द्वारा (३) कोयल के द्वारा

(ध) मकर संक्रांति में किन चीजों का महत्त्व है -

(१) चावल, गुड़, तिल का (२) आलू, गोभी, टमाटर का (३) दल, रोटी, सब्जी का

(२) खाली स्थान भरिए-

१ गिरहबाज और हूमर----- की प्रजाति है ।

२ इला सचानी काठियावाड़ी-----में माहिर थी ।

- ३ लिखने की गति धीमी होने के कारण इला कक्षा ----- की परीक्षा पास नहीं कर सकी ।
- ४ इला का बचपन राजकोट में अपने -----के घर बीता ।
- ५ केशव की उम्र -----साल थी ।
- ६ केशव ने -----के टुकड़े से पत्थर पर लकीरें खिंचीं ।
- ७ लोनपोगार-----के मंत्री थे ।
- ८ राम, कौशल्या और ताड़का -----कथा के पात्र हैं ।
- ९ खिलौनेवाले कविता की कवयित्री का नाम -----है ।
- १० सरला -----खरीदने की ज़िद कर रही है ।
- ११ पिनकोड की शुरुआत-----को हुई थी ।
- १३ पैदल डाक पहुँचाने वालों को ----- कहा जाता था ।
- १४ असम में फ़सलों का त्योहार -----के रूप में मनाया जाता है ।
- १५ आदिवासी जनजातियाँ -- -----की पूजा करते हैं।

(३) एक शब्द में उत्तर लिखिए -

- १ लोनपोगार का बेटा कैसा था ?
- २ लड़की ने पहली बार भेड़ों के शरीर से क्या निकाला ?
- ३ लोनपोगार ने लड़की को क्या बनाने को कहा ?
- ४ लोनपोगार ने अपने बेटे को क्या देकर शहर भेजा ?
- ५ तिलकूट और तिलगुड़ कहाँ से आया था ?
- ६ पतंगपर्व कब मनाया जाता है ?
- ७ केरल में फ़सलों का त्योहार किस रूप में मनाया जाता है ?
- ८ बादशाह अकबर किससे नक्काशी सिखाना चाहते थे ?
- ९ इला का बचपन किस गाँव में बीता ?
- १० पिनकोड की शुरुआत कब हुई ?
- ११ राजा-महाराजाओं के पास किस तरह के हरकारे हुआ करते थे ?
- १२ बादशाह अकबर ने किस फकीर के सम्मान में सीकरी में नगर बसाने का फैसला किया ?
- १३ लोनपोगार ने अपने बेटे को कितनी भेंड़े दी थी ?
- १४ बालक किसको मार भागना चाहता था ?
- १५ .पाठ में 'खिचड़ी' का मतलब किससे है ?

प्रश्न ४ निम्नलिखित प्रश्नों के लघु उत्तर लिखिए -

- १ मंत्री ने अपने बेटे को शहर क्यों भेजा ?
- २ लोनपोगार किन-किन बातों के बारे में सोचकर परेशान होते थे ?

- ३ 'भोला' और 'बुद्ध' में क्या अंतर है ?
- ४ बाहर देखने से समय का अन्दाज़ क्यों नहीं हो पा रहा था ?
- ५ किन-किन चीज़ों से तेल बनता है ?
- ६ जिनके पास घड़ी नहीं होती वे समय का अनुमान किस तरह लगाते हैं ?
- ७ बड़े आदमी से केशव का क्या मतलब है ?
- ८ अकबर को पहरेदार की दखलंदाज़ी अच्छी क्यों नहीं लगी ?
- ९ अकबर ने जब नक्काशी सीखना चाहा, तो केशव ने उन्हें संदेह भरी नज़रों से क्यों देखा ?
- १० इला की कशीदाकारी में खास बात क्या थी ?
- ११ इला कक्षा दसवीं की परीक्षा पास क्यों नहीं कर सकी ?
- १२ पैदल हरकारों को किस-किस तरह की दिक्कतों का सामना पड़ता होगा ?
- १३ पत्र में नाम न होने से क्या समस्याएँ आ सकती हैं ?
- १४ आपको रामचंद्र की कौन-कौन सी बातें अच्छी लगीं ?
- १५ तिल का किन-किन रूपों में इस्तेमाल किया जाता है ?

प्रश्न ५ निम्नलिखित प्रश्नों के दीर्घ उत्तर लिखिए -

- १ बुराई पर अच्छाई की जीत वाले त्योहार कौन-कौन से हैं ? किसी एक का वर्णन करें ।
- २ 'राख की रस्सी' पाठ में आप लड़की को 'समझदार' कहेंगे या बुद्धिमान ? क्यों ?
- ३ केशव दस साल का है । क्या उसकी उम्र के बच्चों का इस तरह मिलती काम से जुड़ना ठीक है? अपने उत्तर का कारण भी जरूर लिखिए ।
- ४ 'फ़सलों का त्योहार' पाठ से मिलने वाली शिक्षाओं का वर्णन करें ।
- ५ इला सचानी के जीवन से आपको क्या प्रेरणा मिलती है?
- ६ महाकाव्य रामायण से आपको कौन-कौन सी शिक्षाएँ मिलती हैं ?

(खण्ड- ब)

प्रश्न ६ निम्नलिखित अपठित गद्यांश को ध्यानपूर्वक पढ़कर नीचे लिखे प्रश्नों के सही उत्तर चुनिए -

वल्लभभाई निर्भीक एवं स्पष्टवादी थे । उन्हें गलत बातों पर बड़ा क्रोध आता था । यहाँ तक कि गलत बातों पर अपने शिक्षकों तक का विरोध कर बैठते थे । जब वे नाडियावाड़ में पढ़ते थे, तो उनके एक शिक्षक किताबें बेचने का व्यवसाय करने लगे । विद्यार्थियों को भी वे इस बात का दबाव डालते थे कि वे उन्हीं से किताबें खरीदें । वल्लभभाई को अपने गुरु की यह बात उचित नहीं लगी । उन्होंने इसका विरोध किया । अध्यापक को लाचार होकर अपना यह व्यवसाय बंद करना पड़ा ।

(क) वल्लभभाई को किन बातों पर क्रोध आता था ?

(१) स्पष्ट बातों पर (ब) व्यंगपूर्ण बातों पर (३) गलत बातों पर

(ख) शिक्षक ने क्या बेचने का व्यवसाय किया ?

(१) कापियाँ (२) किताबें (३) पेन्सिल

(ग) इनमें से कौन-सा गुण वल्लभभाई के स्वभाव से मेल नहीं खाता?

(१) निर्भीक (२) डरपोक (३) स्पष्टवादी

(घ) वल्लभभाई गलत बातों पर किनका विरोध करने से नहीं चूके ?

(१) मित्रों का (२) शिक्षकों का (३) प्रधानाचार्य का

(ड.) वल्लभभाई के विरोध पर शिक्षक को क्या करना पड़ा ?

(१) वल्लभ को डाँटना पड़ा (२) व्यवसाय बंद करना पड़ा (३) व्यवसाय बदलना पड़ा

प्रश्न ७ निम्नलिखित अपठित काव्यांश को ध्यानपूर्वक पढ़कर नीचे लिखे प्रश्नों के सही उत्तर चुनिए -

माँ ये लहरें भी गाती हैं

कल-कल, छल-छल के मधुर स्वर में

अपना गीत सुनाती हैं |

मैं कब से बुला रही इनको

पर मेरे पास नहीं आतीं

कुछ खेल खेलतीं इसलिए

तट तक आकर फिर भाग जाती हैं

मैं चलूँ, साथ खेलूँ इनके

देखो ये मुझे बुलाती हैं |

माँ ये लहरें भी गाती हैं |

(क) लहरें क्या गाती हैं |

(१) मधुर गीत (२) कटु वचन (३) भाषण

(ख) कौन किसे बुला रहा है ?

(१) माँ बच्चे को (२) कवि लहरों को (३) गीत हमको

(ग) 'मधुर' का विलोम शब्द है -

(१) मधु (२) कठोर (३) कड़वा

(घ) 'तट' शब्द का पर्यायवाची शब्द है -

(१) किनारा (२) अंबर (३) धरती

(ड.) 'माँ' शब्द का पर्यायवाची नहीं है

(१) जनक (२) माता (३) जननी

प्रश्न ८ निम्नलिखित प्रश्नों के उत्तर लिखिए -

१ भाषा के कितने कौशल हैं ? नाम लिखिए |

- २ भाषा में व्याकरण का क्या महत्त्व है ?
- ३ शब्द किसे कहते हैं ? उदहारण सहित लिखिए ।
- ४ उत्पत्ति के आधार पर शब्द के कितने भेद हैं ?
- ५ संज्ञा किसे कहते हैं ? उदहारण सहित लिखिए ।
- ६ लिंग किसे कहते हैं ? ये कितने प्रकार के होते हैं ?
- ७ सर्वनाम किसे कहते हैं ? उदहारण सहित लिखिए ।
- ८ निश्चयवाचक सर्वनाम और अनिश्चयवाचक सर्वनाम में उदहारण सहित अंतर स्पष्ट कीजिए ।

प्रश्न ९ निर्देशानुसार उत्तर लिखिए -

(क) सही / गलत चुनिए -

- १ लिपि में साहित्य लिखा जाता है ।
- २ व्यक्तिवाचक संज्ञा से भाववाचक संज्ञा बनती है ।
- ३ बोली का क्षेत्र विस्तृत होता है ।
- ४ संज्ञा के चार भेद होते हैं ।
- ५ व्याकरण हमें केवल शुद्ध बोलना सिखाता है ।
- ६ 'उदासी' शब्द भाववाचक संज्ञा है ।
- ७ 'गेहूँ' द्रव्यवाचक संज्ञा है ।
- ८ लिपि में साहित्य लिखा जाता है ।
- ९ संस्कृत भाषा की लिपि देवनागरी है ।

(ख) तदभव शब्द लिखिए -

- १ गज २ ग्राम ३ दधि ४ सूर्य ५ सर्प ६ चन्द्र

(ग) भाववाचक संज्ञा बनाइए-

- १ सुन्दर २ चतुर ३ साफ ४ मूर्ख ५ हिंसक ६ गहरा

(घ) लिंग बदलिए -

- १ सम्राट २ भील ३ नाग ४ सहपाठिन ५ विद्वान ६ मोर

(ङ.) वचन बदलिए -

- १ झंडा २ लकड़ी ३ तस्वीर ४ वस्तुएँ ५ चिड़ियाँ ६ साड़ियाँ

(च) उचित कारक चिहनों द्वारा खाली स्थान भरिए -

- (१) चाचाजी श्रेय----- सायकिल लाए ।
- (२) कविता ----- मधुर गीत सुनाया ।
- (३) आम के पेड़ ----- कोयल कुहूक रही है ।
- (४) रमन बाज़ार ----- फल-सब्ज़ी ला रहा है ।

(५) कपिल जय----- मदद माँगने आया है ।

(छ) वर्ण-विच्छेद कीजिए-

१ कलाकार २ चित्रकार ३ मर्म ४ दशहरा

(ज) उचित सर्वनाम शब्द द्वारा खाली स्थान भरिए -

१ -----तुम मेरे साथ घूमने चलोगे ?

२ छात्र अपना काम -----कर रहे हैं ।

३ ----- कुछ भी नहीं जानता ।

४ जिसने परिश्रम किया होगा -----सफल होगा ।

प्रश्न १० निर्देशानुसार उत्तर लिखिए -

(क) वाक्य बनाकर अर्थ स्पष्ट कीजिए -

(१) अनल- अनिल (२) कपट-कपाट (३) शोक-शोक (४) दिशा-दशा (५) बेल-बैल

(ख) पर्यायवाची शब्द लिखिए (दो-दो) -

१ राजा २ बगीचा ३ निर्धन ४ दुःख ५ साँप ६ नदी

(ग) उचित संबंध जोड़िये -

क	ख
गुण	नास्तिक
आस्तिक	निरादर
विद्वान	दोष
जीवन	प्रकाश
अंधकार	मूर्ख
स्वतंत्र	मरण
आदर	परतंत्र

प्रश्न ११ भाई के विवाह में शामिल होने के लिए अवकाश लेने हेतु अपने प्राचार्य को एक आवेदन-पत्र लिखिए ।

अथवा

ग्रीष्मावकाश की योजना जी जानकारी देते हुए अपने दादाजी को एक पत्र लिखिए ।

प्रश्न १२ किसी एक विषय पर अनुच्छेद लिखिए -

१ हमारा पुस्तकालय

२ खेल और हम

३ समाचार-पत्र

Worksheet (Class: V)

Subject: English

Q.1. Read this sentence and answer the questions that follow.

This would bring the game to an abrupt end.

i) Which game is the narrator talking about?

ii) Why did the game come to an abrupt end?

Q.2. What did Gavaskar like to do whenever he went to Madhav Mantri's house? Why?

Q.3. Fill in the blanks with the correct interjections.

a).....I hurt my toe.

b).....It is such a beautiful sunrise.

Q.4. Tick the correct abstract noun.

a) **attracted**-----attractive-----attraction-----attractant-----

b) **beautiful**-----beautification-----beauty-----beautifully-----

Q.5. Tick the correct option.

There is no shortcut to the top means

a) One can reach a high position in life through short cuts.....

b) One must work hard to succeed in life.....

Q.6. Write the plural of these nouns.

a) key -----

b) tray-----

c) cry -----

d) body-----

e) furniture -----

f) cattle -----

g) radio -----

h) chief -----

Q.7. Underline the common nouns and circle the proper nouns.

- a) Amritha read The Adventures of Tom Sawyer last Saturday.
- b) Aditya is a good student. English is his favourite subject.

Q.8. Complete each phrase by choosing correct collective noun from the box. (troop pack horde peal)

- a) a _____ of wolves.
- b) a _____ of rats.
- c) a _____ of bells.
- d) a _____ of monkeys.

Q.9. Form abstract nouns.

- a) kind _____
- b) leader _____
- c) beautiful _____
- d) proud _____

Q.10. Rewrite the sentences by changing the nouns from singular to plural.

- a) The leaf fell from the tree.

- b) The hero rode on a black horse.

Worksheet (Class V – English)

Name :

Class:

Section:

Date:

SECTION A: READING SECTION

Read the passage carefully and then answer the questions that follow.

Makrana , a small town in Rajasthan has been famous for its marble mines since ancient times. Four hundred years ago, the Makrana marble adorned the magnificent monuments of the Mughals including the famous Taj Mahal at Agra. Two centuries later, Viceroy Lord Curzon used the Makrana marble for Kolkata's Victoria Memorial. In the five splendid Dilwara Jain marble temples at Mount Abu, unique in history of marble-carving, the same Makrana marble has been used.

Marble is quarried in a series of channels or slots made in the face of the rock. It is extracted by manual labour as blasting may damage or crack the marble. In its pure form, marble is ivory white in colour. Impurities often give it shades of pink, green, brown, and cream. The rough marble blocks are cut and polished before being sold. The entire business activity of Makrana town revolves around marble trading.

A1. Why is marble extracted by manual labour?

- a. It is cheaper
- b. Because it is cut in slots
- c. Blasting may break the marble

A2. The word 'adorned' from the passage is –

- a. Verb
- b. Adjective
- c. Noun

A3. 'Quarried ' means-

- a. Extract
- b. Measure of capacity
- c. Floor tile

A4. The antonym of the word 'unique' is-

- a. Common
- b. Union
- c. Exception

A5. State True or False for the following statements.

- a. Taj Mahal is made up of marble adorned from Makrana marble.
- b. Marble is extracted through blasting process.

A6. Name any two monuments made up of marble from Makrana .

A7. Who had used Makrana marble for building Victoria Memorial of Kolkata?

SECTION B: WRITING SECTION: Attempt any one of the following.

Imagine you are the little bird in the story ' Why Evergreen Trees Never Lose Their Leaves. Write a diary entry about your experience in the forest.

Or

Imagine that you have won the first prize in the Inter-house calligraphy competition. Write a diary entry about your feelings and your experience.

OR

Write a letter to the secretary of Delhi District Cricketing Association (DDCA) requesting him to inform you of the procedure to join the Association.

Or

Write a letter to the Principal of your school requesting him to issue you the transfer certificate.

SECTION – C : GRAMMAR SECTION

1. Underline the common nouns and circle the proper nouns.
That dove belongs to Mrs. and Mr. Shah. It is their pet. Its name is Becky.
2. Underline the correct collective noun in each sentence.
 - i. The mirror was on the (chest/set) of drawers.
 - ii. We saw a (troupe/troop) of monkeys on our way back from picnic.
 - iii. I love the (pack/peal) of bells.
3. Form the abstract nouns from the given adjectives and common nouns.
 - i. Leader -----
 - ii. Patient -----
 - iii. Poor -----
4. Write the plural forms of the following words.
 - i. Essay -----
 - ii. Fly -----
 - iii. Cattle -----
 - iv. Piano -----
 - v. Watch -----
 - vi. Cliff -----
 - vii. Half -----
 - viii. Policeman -----
5. Write C for countable and U for uncountable.
 - i oil -----
 - ii coin -----
 - iii cheese -----
 - iv time -----
6. Choose the correct word from the words given below and fill in the blanks.
Bale, sheaf, tube, pane, piece, pile
 - i ----- of corn ii -----of toothpaste
 - iii -----of wood iv -----of chalk
 - v -----of glass vi -----of cloth
7. Fill in the blanks with the opposite gender of the noun.
 - i Gentleman and -----
 - ii Emperor and -----
 - iii Monk and -----

8. Rewrite the following sentences with the opposite gender of the nouns.

- i The stag was running fast
- ii She was named the empress of India.
- iii My neighbour is a bachelor

SECTION – D : TEXT BOOK SECTION

1. Read the following sentences and answer the questions that follow.

I restrained myself and played no attacking shot.

- a. What was the narrator doing?
- b. Why did the narrator not play an attacking shot?

OR

'May I live among your branches till they come back to me?'

- a. Who said these words and to whom?
- b. Who are 'they' in this line?

2. Tick the correct option.

a. Birds fly south in –

- (i) winter (ii) summer (iii) spring

b. The speaker was kept warm by –

- (i) its mother (ii) its brother (iii) the sunny sky

3. Answer the following questions. (Attempt any 4 questions)

- a. Why did the little bird go to the birch tree?
- b. How did the speaker learn to have fun, in the poem 'Animals Have Feelings Too!?'
- c. How did his uncle's sharp observation help Gavaskar in retaining his identity?
- d. What happens when a new student joins your class? How do you make the new student feel comfortable?
- d. You see a child pelting stones at stray dogs. What will you do?

4. Do as directed.

A. Choose the correct abstract noun for the given verb.

- a. OBSESS (i) obsessive (ii) obsession (iii) obsessiveness
- b. FRIGHTENED (i) fright (ii) frightful (iii) frightener

B. Choose the correct meaning of the underlined phrase.

Mr. Narayan Masurekar was eagle-eyed means-

- a. He had the eye of an eagle.
- b. He could see things that were far away.
- c. He noticed everything, even minute details.

C. Make a new word (compound adjective) by matching the word given in column A and column B

Column A	Column B	Compound Adjective
Well	cold	-----
World	known	-----
ice	eyed	-----
sharp	famous	-----

O. P. JINDAL SCHOOL, RAIGARH (CG) 49600 1

Phone: 07762-227042, 227293, 227001 (Extn. 49801, 49802, 49804, 49806); Fax: 07762-262613; website: www.opjsrgh.in; e-mail: opjsraigarh@jspl.com

WORKSHEET (SUBJECT – ENGLISH)

NAME OF THE STUDENT-

CLASS-V

SEC-

1. Write the collective nouns.

- i) aof stars ii) a.....of wolves iii) a.....sticks
iv) a.....of puppies v) a.....of mountains

2. Form abstract nouns from the following adjectives and common nouns :

- i) wise..... ii) poor..... iii) mother.....
iv) victor..... v) strong.....

3. Write plurals of the following :

- i) photo ii) tooth iii) essay..... iv) cliff.....
v) nephew..... vi) glove..... vii) battery..... viii) furniture.....

4. Write much or many.

- i) coins ii) money iii) butter
iv) crayons v) stars

5. Fill in the blanks.

- a) A..... of salt b) A..... of wood c) A..... of juice
d) A..... of chocolate e) A..... of sand f) A..... of paper
g) A..... of toothpaste h) A..... of rice

6. Identify the Nouns\ pronouns in the followings sentences:

- a) Her husband is a famous writer. b) The king was happy to meet the princess.
c) The globe belongs to our grandfather. d) They were invited to the party by the gentleman.

7. Rewrite the Sentence with the opposite gender of nouns :

- The stag was running fast.
.....
- I rode a horse at the park.
.....
- My neighbor is a bachelor.
.....
- The man sells toys at the fair.
.....
- She was named the empress of India.
.....

O. P. JINDAL SCHOOL, RAIGARH (CG) 496001

Phone: 07762-227042, 227293, 227001 (Extn. 49801, 49802, 49804, 49806); Fax: 07762-262613; website: www.opjsrgh.in; e-mail:opjsraigarh@jpsl.com

WORKSHEET (SUBJECT – ENGLISH)

NAME OF THE STUDENT-

CLASS-V

SEC-

Q.1. Answer these questions.

(1) Why was Grandfather asked to accompany the hunting party?

(2) How did Timothy behave with Toto and the Puppy?

(3) Describe how Timothy played with the author?

Q.2. Read these sentences and answer the question that follow -

I am talking to Timothy.

(a) Who was the speaker?

(b) Who was he speaking to ?

(c) Who was Timothy?

Q.3. Fill in the blanks with correct option:

(a) Timothy was found _____ (hiding/sleeping) among the roots of a banyan tree.

(b) _____ (Toto, the monkey/ Toto, the puppy) played with Timothy at Grandfather's house.

(c) Timothy became fierce at the age of _____ (Three/six) months.

Q.4. Fill in the blanks with suitable pronouns:

(a) This is an interesting book. Have _____ read _____ ?

(b) Girish has two cousins. _____ are younger than _____

(c) Don't play with the glass table. _____ may break.

Q.5. Choose the correct pronoun from the brackets and rewrite each sentences.

- (a) Maria and (I/me) went to the library together.
- (b) The teacher gave the books to Harry and (I/me).
- (c) (Her/She) and (I/me) scored the same marks.
- (d) Let you and (I/me) work together.

Q.6. Fill in the blanks with possessive pronouns in place of the groups of words in brackets.

- (a) This ring is _____ (belongs to me).
- (b) These kittens are _____ (belong to us).
- (c) She is my friend. This bicycle is _____ (belongs to her).

Q.7. Fill in the blanks with reflexive pronouns:

- (i) Boys you will hurt _____
- (ii) He _____ prepared the speech.
- (iii) We saw _____ in the mirror.

Q.8. Fill in the blanks with names of colours.

- (i) Leaves are _____
- (ii) Milk is _____
- (iii) Apples are _____

Q.9. Un-scramble the letters in brackets and write the adjectives.

- (i) a (tretib) _____ taste
- (ii) a (recasels) _____ driver
- (iii) an (suanuul) _____ gift
- (iv) an (gentletilni) _____ Answer
- (v) an (gaminairy) _____ scene.

Q.10. Rewrite the following phrases in three words, using suitable adjectives.

- (i) A scarf which is made of wool. _____
- (ii) A story that is full of interest. _____
- (iii) A thing which is of no value. _____
- (iv) A house which is not occupied by anyone. _____

O.P.JINDAL SCHOOL, RAIGARH (CG)496001

Phone:07762-227042,227293,227001(Extn. 49801,49802,49804,49806), Fax: 07762-262613, website: www.opjsrgh.in;e-mail:opjsraigarh@jspl.com

WORK SHEET Subject - Mathematics

Name of the Student - _____

Class – V Section – _____

Revision Of Fundamentals

Q1. Fill in the blanks with correct answers.

- Whole number starts with_____.
- Parts of whole is called_____.
- The place value of 6 in 5,635 is _____.
- Perimeter of a square of side 3cm is _____.
- Last natural number is _____.
- Composite numbers have _____factors while primes have only_____, _____and _____.
- _____is the smallest Prime number.
- _____ is neither composite nor prime.
- Area of a rectangle is _____.
- All the squares are _____ but all _____are not the squares.

Q2. Write the tables of 16 and 19.

Q3. What do you mean by Co-Primes and Twin- Primes write their examples.

Q4. Cost of 13 eggs was Rs 65 then how much will be the cost of one dozen such eggs?

Q5. Write the following improper fractions as mixed fractions:

1) $\frac{81}{8}$

2) $\frac{52}{6}$

3) $\frac{19}{4}$

4) $\frac{14}{3}$

5) $\frac{96}{5}$

Chapter – 4 - Parts and Wholes

Q6. Fill in the blanks with correct answers.

- Green colour is _____ part of our National Flag.
- 4 hrs are _____ part of a day.
- 200 ml is _____ part of a litre.
- $\frac{5}{6}$ of 36 is _____.
- 10 apples weigh 1 kg. We will get _____apples in $2\frac{3}{5}$ kg.

Q7. Write any 4 equivalent fractions of following. 1) $\frac{4}{3}$ 2) $\frac{7}{8}$ 3) $\frac{1}{4}$ 4) $\frac{7}{9}$.

Q8. Reduce the following fractions to their lowest terms:

1) $\frac{40}{60}$ 2) $\frac{72}{84}$ 3) $\frac{100}{404}$ 4) $\frac{70}{98}$ 5) $\frac{26}{65}$ 6) $\frac{55}{15}$.

Q9. Arrange the following fractions in ascending order.

1) $\frac{2}{3}$, $\frac{8}{3}$, $\frac{1}{3}$, $\frac{5}{3}$, $\frac{10}{3}$, $\frac{13}{3}$

2) $\frac{17}{8}$, $\frac{23}{8}$, $\frac{13}{8}$, $\frac{7}{8}$, $\frac{3}{8}$, $\frac{27}{8}$

3) $\frac{1}{8}$, $\frac{2}{5}$

4) $\frac{5}{7}$, $\frac{3}{4}$

Q10. A bakery baked 240 cakes on a day. $\frac{3}{4}$ of the cakes were sold. How many cakes were sold?

Q11. Avinav spends 4 hours a day playing a game. Which part of the day does he play the game?

Q12. Sohini had Rs.1000. She purchased a book for Rs.250. What part of money she is having now?

Q13. A bottle has 600 grams of sauce. $\frac{19}{25}$ of it was used. How much sauce was left in the bottle?

What part is it of total?

O. P. JINDAL SCHOOL, RAIGARH (CG) 496 001

Phone: 07762-227042, 227293, 227001 (Extn. 49801, 49802, 49804, 49806); Fax: 07762-262613; website: www.opjsrgh.in; e-mail:opjsraigarh@jspl.com

Worksheet (Class V – Maths)

1. Name the kind of angles formed at the following given time.

- a) 10:25
- b) 4:45
- c) 6:00
- d) 2:10
- e) 8:45
- f) 9:10

2. Draw the following angles.

- a) 65°
- b) 135°
- c) 180°
- d) 95°

3. Fill in the blanks to complete the tables.

Sl.no.	Perimeter	Length	Breadth
1.	30cm	10 cm	
2.	46cm		8cm
3.		25cm	13cm
4.	52cm		10cm
5.		18cm	12cm
6.	70cm	21cm	

SL.NO.	Perimeter	Side of square
1.	48cm	
2.		18cm
3.	60cm	

4. Fill in the blanks.

- a) The common end point of an angle is called -----.
- b) An angle of 180° is called a-----angle.
- c) Each angle of a rectangle measures----- and is called a-----angle.
- d) The two rays of a angle is called -----of the angle.
- e) A straight angle is double of ----- angle.
- f) $\frac{1}{3}$ of a straight angle is = -----.
- g) $\frac{4}{3} \times 80^\circ =$ -----.

5. Draw the following shapes on the square grid.

a) A rectangle with perimeter 14cm.

B) A square with perimeter 32cm.

c) A rectangle with area 42 sq.cm.

d) A square with area 49 sq.cm.

e) A hexagon with side 6cm.

6. What will be a larger perimeter? A square with side 25 cm or a rectangle with length 18cm & breadth 13cm? Whose area is bigger ?

O. P. JINDAL SCHOOL, RAIGARH (CG) 496001

Phone: 07762-227042, 227293, 227001 (Extn. 49801, 49802, 49804, 49806); Fax: 07762-262613; website: www.opjsrgh.in; e-mail:opjsraigarh@jspl.com

WORKSHEET (SUBJECT – MATHEMATICS) CHAPTER-1 (THE FISH TALE)

NAME OF THE STUDENT-

CLASS-V SEC-

Q1. Write the answer:-

- Ten lakh = _____ thousands
- In numeral: forty crore four hundred ninety two is written as _____
- Write in short: $100000000 + 100000 + 10000 + 10 + 1 =$ _____
- Write in expanded form: 5,50,50,500 _____
- Write the number name of : 18,01,20,650 _____
- _____ lakhs = 1 crore
- The predecessor of 6,43,26,540 is _____
- The successor of 66,89,999 is _____
- 9,20,55,799 _____ 9,20,56,799 (use $>$, $<$, $=$)
- Write the place value of 5 in 6538443 _____
- _____ = divisor x quotient + remainder
- In the addition sum, the numbers to be added are called _____
- $(15 \times 18) \times _ = 15 \times (18 \times 10) = (_ \times 10) \times 18$
- In division ,the remainder at every step is less than the _____
- How many lakhs are there in 500 thousands? _____

Q2. Look at the rate list and answer the following questions:-

ITEM	RATE LIST
Potatoes	Rs 9/kg
onions	Rs 12/kg
Apples	Rs 55/kg
Cucumbers	Rs 15/kg
Mangoes	Rs 50/kg
Grapes	Rs 50/kg

- Radha bought 4kg of apples and Varun bought 3 and half kg of mangoes. Who paid more?
- How much money did Radha earn by selling 2 kg of cucumbers and 1 kg of tomatoes?

c) Radha sold 3kg of grapes to Rashmi. How many kgs of cucumbers should Radha sell to earn the same amount of money ?

d) At the end of the day ,Radha sold 60 kgs of onions for Rs 840, so she sold each kg of onion for Rs _____

e) Cost of three-fourth kg of potatoes is Rs _____

Q3. a) Fazila sold a fish of 8 kg for Rs 1200. At what price per kg did Fazila sell the fish?

b) Floramma sells prawns for Rs 150 per kg. She has sold 10 kg prawns. How much money did she get from that ?

Q4. A motor boat covers 20 km in one hour, find:

a) Distance covered by it in 3 and half hours.

b) Time taken by it to cover 90 km.

Q5. Sheela buys grapes at Rs 45perkg.She dries the grapes to make raisins.

Raisins are one-fourth of the weight of grapes. She sells the raisins for Rs 200 per kg. Calculate:

a) How many kg of raisins will she get from 8000 kg of grapes?

b) Cost of 8000 kg of grapes _____

c) How much will Sheela earn by selling the raisins she get from 8000 kg of grapes ?

Q6. Twenty students made their own bank. Each saves Rs 50 per month and put it in the bank. Calculate:

a) How much money does the group collect every month?

b) Find how much money is saved by one student in one year?

c) How much money will be collected in 10 years by the group?

NAME OF THE STUDENT-

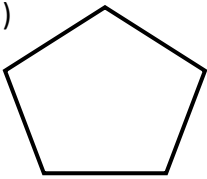
CLASS-V

SEC-

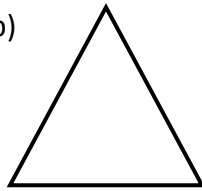
Q1. Draw any 4 alphabets which can be divided into 2 symmetrical halves. Draw the line of symmetry too.

Q2. Draw and show how the following shapes will look after $\frac{1}{2}$ turn.


a)



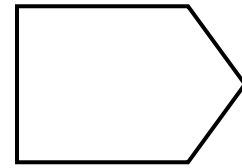
b)



c)

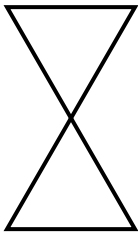


d)

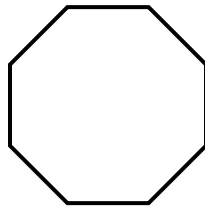


Q3. Draw and show how the following shapes will look after $\frac{1}{4}$ turn.

a)



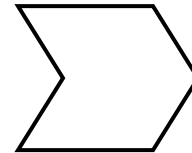
b)



c)



d)

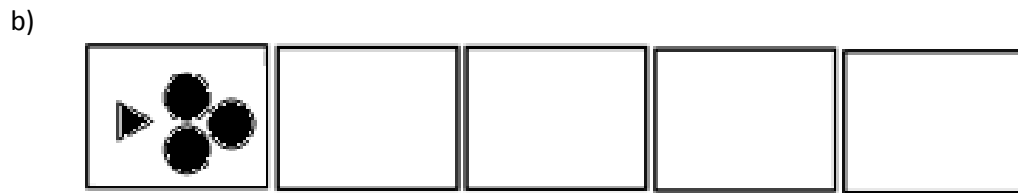



Q4. Draw any 3 digits which look the same after $\frac{1}{2}$ turn.

Q5. Look at the following shapes. Draw how they will look on $\frac{1}{3}$ and $\frac{1}{6}$ turn.

	$\frac{1}{3}$ turn	$\frac{1}{6}$ turn
P		

Q6. Continue the pattern by $\frac{3}{4}$ turn



Q7. Fill the square using all the numbers from 46 to 54 so that each of the line will add up to 150.

	50	

Q8. Convert the following numbers into PALINDROMES.

i) 904

ii) 78

iii) 908

iv) 526

Q9. Write 6 three times. Use X and – signs so the answer should be 30.