

**MODEL PAPER**  
**SUBJECT- ENGLISH**  
**CLASS-IV**

**Section A – Reading (15 marks )**

**A1. Read the passage carefully and complete the sentences.**

There was a giant who lived in a forest. One day, as he was roaming around he saw a hungry traveller shivering in the cold. He took sympathy on the poor traveller and invited him to come to his hut. On the way, the giant noticed that the traveller was blowing air through his mouth at his fingers. When the giant asked why he was doing so, he replied that he was heating his hand with the air from his mouth. After reaching the cave, the giant served him a cup of hot soup. On receiving it, the traveller started blowing air at the cup. The giant was surprised and asked, "Why are you again blowing air at the cup ? Is it not hot enough for you? The traveller replied that now he was cooling the soup with the air from his mouth. The giant now grew suspicious and said, ' you are blowing both heat and cool from the same mouth. You are a cheat. I can't trust you.' He did not give the traveller any chance to explain his action and immediately chased him off.

- a. There was a giant who lived in a \_\_\_\_\_.
- b. The traveller was blowing air through his \_\_\_\_\_.
- c. The giant served him a cup of \_\_\_\_\_.
- d. The giant now grew \_\_\_\_\_.

**A2. Read the following passage carefully.**

**Reading comprehension**

**Money cannot buy everything**

Ramchand, a poor farmer, and Premchand, a wealthy landlord were neighbours. Ramchand was relaxed and happy. Though he was poor, his life was devoid of stress. He never bothered to close the doors and windows of his house at night. He had a sound sleep every night. He lead a very peaceful life. Premchand was always stressed and worried. He used to carefully close the doors and windows of his house at night. He could not sleep well because of his anxiety for his wealth. He was always bothered that someone might break open his safe and steal all his money. He envied the peaceful life of Ramchand. One day, he called Ramchand and gave him a boxful of cash saying, 'Look my dear friend. I am blessed with plenty of wealth. I find you in poverty. So, take this cash and live in prosperity. Ramchand was overwhelmingly happy. He was joyful throughout the day. Night came. Ramchand went to bed as usual. But, today, he could not sleep. He went and closed the doors and windows. He kept staring at the box of cash whole night with his eyes wide open. He could hardly get any sleep. As soon as day broke, Ramchand went to return the box of cash to Premchand. He gave away the box saying, 'Dear Friend, I am poor. But your money took away my peace from me. Please take back your money. I cannot afford to lose my peace of mind for anything in this world'.

**I. State whether the following statements are true or false.**

- a. Ramchand was a poor farmer \_\_\_\_\_
- b. Ramchand and Premchand were neighbours \_\_\_\_\_

**II. Fill in the blanks**

- a. Premchand was always \_\_\_\_\_ and \_\_\_\_\_
- b. Ramchand lead a very \_\_\_\_\_ life.

**III. Tick the correct option**

- a. Ramchand was
  - i. Rich
  - ii. Unhappy
  - iii. Relaxed and happy

- b. Premchand used to
  - i. Open the doors
  - ii. Close the doors and windows
  - iii. Have a sound sleep

**IV. Write the antonyms of the following words**

- a. Poor \_\_\_\_\_
- b. Night \_\_\_\_\_
- c. Close \_\_\_\_\_
- d. Unhappy \_\_\_\_\_

**V. Answer the following questions**

- a. Why could not Premchand sleep at night ?
- b. What did Ramchand do, as soon as the day broke ?

**Section B (Writing – 20 marks)**

**B1. Write a diary entry on any one of the following topics. ( In approximately 50 words )**

- a) Imagine you are Heidi. Write a diary entry about your first day on the Alps with Peter and the goats.

**OR**

- b) Imagine you are Naoko. Write a diary entry about how you and Jack became friends.

**B2. Report writing (approx. 100-200 words) on any one of the two.**

- a) Imagine you are a newspaper reporter you were covering the case between Naduck and Lakshman. Write a newspaper report on the case.

**OR**

- b) Imagine you are newspaper reporter. Write a report on Independence Day celebration held in O.P Jindal School.

**B3. Informal letter ( approx. 100-120 words) on any one out of two.**

- a) You and your friends have broken the neighbours window. Write a letter to your neighbour, apologising for your behaviour.

**OR**

- b) It is your exam time and you want to study hard. Your neighbour is in the habit of playing loud music the whole day long. Write a letter to your neighbour requesting him to soften the volume of his music.

**Section – C (Grammar – 20 marks)**

**C1. Rewrite the sentences using pronouns instead of nouns which are underlined.**

- a) Meera is my cousin. Meera is a dancer.
- b) Raju is a boy. Raju is a good student.

**C2. Circle the mistakes in the following sentences and rewrite the sentences using proper articles 'a', 'an' or 'the'.**

- a) My father is an wise, old man.
- b) She is a honest and hard working woman.

**C3. A. Unscramble the letters given in brackets to find the adjective that suits each noun.**

- i. The cat has a (mtohs)\_\_\_\_\_ coat.
- ii. The children in the classroom are very (tqiue) \_\_\_\_\_.

**B. Underline the adjectives .**

- i. The river is wide and deep.
- ii. The fox is a cunning animal.

**C4. Circle the correct form of the adjective to complete the following sentences.**

- a) Girish is a busy/busier man.
- b) He is the richer/richest man in our village.

**C5. Circle the possessive pronouns and the possessive adjectives**

- a) This box is mine.
- b) This is not my bicycle.

**C6. Complete the following table of verbs.**

Basic form	Present participle form	Past form	Past Participle form
1. Walk			
2.	Playing		
3. Run		Ran	
4.	Buying		bought

**C7. A. Arrange the words in the correct order to make meaningful sentences**

- a) Am happy today I.
- b) Is heavily raining it.
- c) Are guards and hard working the honest?
- d) Ice-cream father vanilla bought yesterday.

**B. Complete these sentences meaningfully**

- a) The children \_\_\_\_\_
- b) Some ladies \_\_\_\_\_
- c) The car \_\_\_\_\_
- d) The stars \_\_\_\_\_

**Section D (English Reader – 25 marks)**

**D1. Read the sentences. Answer the questions.**

Suddenly a terrible thing happened.

- a) What was the terrible thing that happened ?
- b) How was the situation saved ?

**OR**

When they take a shower, your ceilings leak.

- a) Why do the ceilings leak when they take a shower ?
- b) What does this tell you about them as neighbours?

**D2. Answer the following questions ( Any Four )**

- a) Who were Jack and Naoko ?
- b) Which three important items of clothing did the children wear on that cold day ?
- c) According to Lakshman, what happened to the iron beam ?
- d) How was peace restored in the end ?
- e) Why did Naduk decide to leave the city ?
- f) Why did Naduk lock Ramu away ?
- g) Which two words tell you that their party goes on for a long time ?

**D3. Answer the following questions ( Any one )**

- 1. According to the poet, which two activities do the people upstairs enjoy doing ?
- 2. What were the differences between Jack's snowman and Naokos's ?

**D4.** Jack and Naokp work together and complete the snowman. Do you think it is good to work together to finish difficult tasks? Give reasons.

**OR**

Sometimes friends ask you to do things that you do not want to do. Is it better to refuse your friend and risk your friendship or is it better to agree unwillingly so that your friendship is not affected? Discuss.

**D5. Fill in the blanks using phrasal verbs.**

- a) We \_\_\_\_\_ warm clothes in winter .
- b) They go to the bathroom on \_\_\_\_\_.
- c) Jack put all the items for decoration in a \_\_\_\_\_.

**D6. Tick the correct answer.**

- a) According to Naoko, snowmen should be made out of \_\_\_\_\_ snow balls.
- i. One
  - ii. Two
  - iii. Three
- b) The People upstairs
- i. Have a bowling alley
  - ii. Have a very big living room
  - iii. Are so noisy that it seems they have a bowling alley

**D7. Complete the following sentences**

- a) Naoko asked her mother if she could go outside and \_\_\_\_\_.
- b) Once there was a rich merchant called Naduk \_\_\_\_\_.
- c) I think our snowmen make \_\_\_\_\_.
- d) If mice can eat up an iron beam, then surely a \_\_\_\_\_.



**Q. 5 Write two examples of each.**

[1x7=7]

- i) Human body waste.
- ii) Organs that help in digesting the food we eat.
- iii) Cereals
- iv) Seeds we get oil from.
- v) Things used to protect our clothes.
- vi) Things used in concrete mixture.
- vii) Uses of air.

**Q.6 Match the following.**

[1x7=7]

- |  |                |
|--|----------------|
| i) process of making food by plants    | help you grow  |
| ii) colouring fabric or yarn           | stomata        |
| iii) making fabric from yarn           | rubber         |
| iv) pulses ,eggs and meat              | weaving        |
| v) tiny pores on leaves                | photosynthesis |
| vi) a plant waste that is useful to us | tepees         |
| vii) Nomads of North America           | dyeing         |

**Q.7 Answer the following questions.**

[2X6=12]

- i) Which part of plants are pulses and cereals?
- ii) Where do people build houses on stilts?
- iii) What do detergents do?
- iv) What is a dairy?
- v) What is the first thing that you should do with a burn?
- vi) What happens when water collects in any part of the house ?
- vii) Why should you not clean your ears with your nails?
- viii) What should one do if a wound does not stop bleeding?

**Q.8 Write answer in 4-5 lines (Any four).**

[3x4=12]

- i) How is silk made?
- ii) What does the brain do when you sleep?
- iii) Write the steps you will take to help a person who is choking?
- iv) Write any four things that a good house should have or be?
- v) What are the three types of food that your body needs? Give examples too.

**Q.9 Read the following paragraph and answer the questions.**

[2x2=4]

Rahul and his mother went to a party .Rahul was very happy to see all his favourite food served there. He took lot of food in his plate .When his mother saw this, she told Rahul that he should take only that much food which he can eat easily to avoid wastage of food. She explained that he should not overeat as overeating can cause indigestion. She also explained that we should not waste food as farmers do lot of hard work to grow crops.

- i) Why we should avoid overeating?
- ii) What moral you learnt from above paragraph?

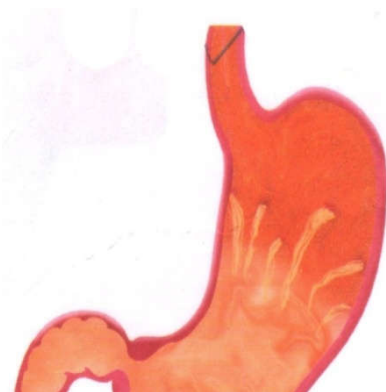
Q.10 Label any five spices in the given picture .

[5]



Q.11 Identify the following pictures.

[1x5=5]




a) \_\_\_\_\_

b) \_\_\_\_\_



c) \_\_\_\_\_

d) \_\_\_\_\_



e) \_\_\_\_\_

**MODEL PAPER-T2**

Time:-3 Hours

**(Maths-IV)**

MM-80

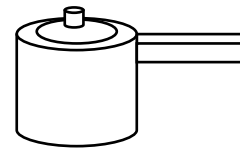
**General Instructions:**

- Question paper is divided into four sections – A, B, C and D.
- Section A comprises of 20 questions of 1 mark each. All questions are compulsory.
- Section B comprises of 8 questions of 3 marks each. Attempt any 6 questions.
- Section C comprises of 8 questions of 4 marks each. Attempt any 6 questions.
- Section D comprises of 4 questions of 6 marks each. Attempt any 3 questions.
- Draw neat diagrams wherever needed.
- For the questions in section B, C and D, show the calculations in fair.

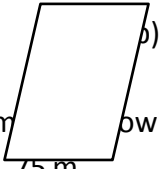
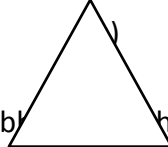

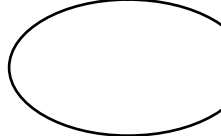
**Section - A**


**Fill in the blanks**

- A1 A brick has .....number of faces.  
A2 The Standard unit of length is .....  
A3 Cost of 1 litre Petrol is Rs 78 then cost of 1000 litre petrol will be Rs.....  
A4 ..... number of days a leap year has.  
A5 This is ..... view of a pressure cooker.



**Choose the Correct option**

- A6 How many notes of Rs 50 are required for making Rs 200.  
a) 5                      b) 4                      c) 6                      d) 2
- A7 Which of the following face shows a face of a brick
- a)  b)  c)  d) 
- A8 From the following ribbon  
a) 75 m                      b) 70 cm                      c) 98 mm                      d) 100 m
- A9 There are 4 very old Paintings. Choose the oldest  
a) 4200 years old                      b) 8600 years old                      c) 1000 years old                      d) 1300 years old
- A10 What is the time shown by the clock?  
a) 5:15                      b) 5 O'clock                      c) 3 O'clock                      d) 3:20



**Do as directed**

- A11 Draw a top view of a spoon.  
A12 Convert into rupees  
45060 P = Rs .....  
A13 Change into 24 hour clock time.  
12:00 Midnight = .....Hours  
A14 Draw a brick showing its three faces.  
A15 ..... m = 8 km 348 m  
A16 Using digit 6, 8,7,4,1 make a 5 digit number closest to 15000.



- A17 10 Days = .....Hours.  
 A18 Draw a net of a cube.  
 A19 The cost of one chocolate is 50P. So we can buy ..... Chocolates by Rs.12.  
 A20. Which Bank Prints Indian Currency Notes? Choose the correct answer.  
 a) State Bank of India                      b) Reserve Bank of India  
 c) Finance Ministry of India d) Unit Trust of India

### Section –B


**(Solve any 6 question from this section)**

**(6 X 3 = 18)**

- Q-B1 Draw top & side views of following objects.  
 a) Railway Line                      b) Funnel                      c) Cup  
 Q-B2 In Marathon Race people have to run about 40 km. If the people run in a stadium, on 400m track then find out how many rounds they need to run for completing the race on the track?  
 Q-B3 Simplify  
 $7289 - 3458 + 4070$   
 Q-B4 Draw where the hands will be.  
 a) 40 minutes after 6 o'clock                      b) 30 minutes before 8 o'clock



- Q-B5 See the following dice the number on the opposite faces to each other adds up to 7.



- a) Which number was on the opposite side of 5?  
 b) In the picture, which number will be at the bottom?  
 c) Which number will you see if you turn the dice left from 5?

- Q-B6 If a person who runs a tea stall earns Rs 30 in a day, how much will he earn in 10 days? Also find his monthly income?  
 Q-B7 The cost of a thousand brick is Rs.1500. Ram needs 12,000 bricks for his courtyard. How much will he have to pay?  
 Q-B8 Radha's height is 1m32cm. Her brother Raju is 85cm taller than her. What is Raju's height?

### Section –C

**(Solve any 6 question from this section)**

**(6 X 4 = 24)**

- C1 Draw net of the following  
 a) A cube    b) A cuboid    c) A cone    d) A cylinder.  
 C2 Write the following times in 24-hour clock format.  
 a) 3:30 in the afternoon.  
 b) 7:15 in the evening.  
 c) 12 o'clock at midnight.  
 d) 11:30 in the morning.

C3 See the Following list then find the answers

<b>Old bricks</b>	<b>Rs 1200/- for 1000 bricks.</b>
<b>New bricks from Intapur</b>	Rs 1800/- for 1000 bricks.
<b>New bricks from Brickabad</b>	Rs 2000/- for 1000 bricks.

Now Calculate

- i) If Rahim wants to buy 3000 New bricks from Brickabad . How much did he pay?  
 ii) Find the cost of 500 Old bricks.
- C4 In a picnic party each child is to be given 1 orange, 1 banana and 5 biscuits. All the children take oranges and biscuits but 38 children do not take bananas. How many oranges, biscuits and bananas are distributed in all?
- C5 Arrange in vertical column and find the sum or difference.  
 a) 21 km 15m + 8 km 8m    b) 12km 963m – 5 km 152m
- C6 On 15<sup>th</sup> May 2011 Aaditya went to buy butter. He checked the packet to see if this butter was safe to eat. He found a print on the packet “**Best before 180 days from the date of packing.**” Then he checked the date of packing. It was 15/01/2011.Help him to find out  
 i) In which month was the butter packed?  
 ii) Which month will it be 180 days after 15/01/2011.  
 iii) Can Aaditya eat the butter on 15<sup>th</sup> May 2011?  
 iv)What do you think about Aaditya and his approach to buy the butter?
- C7 Using the basic shape of bricks draw following patterns  
 a) A Jaali Pattern in a wall                      b) A Jharokha in a wall
- C8 Using the numbers from 1 to 9 only once, complete the magic square so that the numbers in each row, column and diagonal adds up to 15.

	5	

**Section :-D**

(Attempt any 3 questions)

(6X3=18)

D1 Here are the Indian and World records for some jumps  
 Find out from the table

Sports	World Record	Indian Records
High Jump (Men)	Javier S.(2 m 45 cm)	Chandra Pal (2m17 cm)
Long Jump( Men)	Mike P. (8m 95 cm)	Amrit Pal (8m 8cm)
High Jump (Women)	Stefka K. (2m 9 cm)	Bobby A.(1m 91 cm)
Long Jump( Women )	Galina C.(7m 52 cm)	Anju G.(6m 83 cm)

- a) Galina’s jump is nearly(Choose the correct option)  
 I. 7 metres.  
 II. 7 and half metres.  
 III. 8 metres.  
 IV. 10 metres.

b) Whose high jump is very close to two and half metres?( Choose the correct option)

- I. Stefka K.
- II. Chandra Pal
- III. Javier S.
- IV. Bobby A.

c) How many centimetres more should Chandra Pal jump to equal the men's World Record for high jump?

d) Look at the women's world records. What is the difference between the longest and the highest jump?

**D2** Here is a menu of a restaurant.

Menu			
Dosa	Rs.30.00	Soup	Rs.35.00
juice	Rs.25.00	Cutlet	Rs.15.00
Cold drink	Rs.20.00	Chips	Rs.10.00
Milk Shake	Rs.40.00	Samosa	Rs.8.00

Prepare a bill for a customer who has purchase the following items

5 - Cutlets, 4 - Dosas, 4 - Samosas, 3 – juices & 2 Milk Shakes

**D3** The following are the cost and duration of rides at an amusement park.

Roller Coaster	Rs 50	30 Min.
Aqua Dive	Rs 40	15 Min.
Cups and Saucers	Rs 25	3 Min.
Columbus	Rs 35	10 Min.
Ferris wheel	Rs 10	20 Min.
Merry-go-round	Rs 5	5 Min.

1. What is the total cost of tickets for a roller-coaster ride and a ride on the Columbus for a family of four?
2. Which 2 rides can Himesh enjoy in half an hour?
3. Raju paid Rs 100 for 3 rides. Which three rides did he take?
4. Which 2 rides can Aman complete within 10 minutes?

**D4** See the following list then answer the Questions.

Type of Mangoes	Cost Per Thousand
Kalmi	Rs. 1200/-
Tota Fali	Rs. 1800/-
Alphonso	Rs. 2000/-

- a) Kailash decided to buy 2000 Tota Fali Mangoes. How much he has to pay for it?
- b) Ranju want to buy 3500 Alphonso Mangoes. How much he has to pay for all the Mangoes?
- c) Find the cost of 500 Kalmi Mangoes?

# O. P. JINDAL SCHOOL, RAIGARH (CG) 496 001

Phone: 07762-227042, 227293, 227001 (Extn. 49801, 49802, 49804, 49806); Fax: 07762-262613; website: [www.opjrsgh.in](http://www.opjrsgh.in); e-mail: [opjsraigarh@jspl.com](mailto:opjsraigarh@jspl.com)

## प्रारूप प्रश्न पत्र

### कक्षा - चौथी

### खण्ड 'अ'

- प्र.1 निम्नलिखित पठित गद्यांश को पढ़कर पूछे गए प्रश्नों के उत्तर लिखिए -  
एक दिन रेलवे स्टेशन पर पापा ने एक अजीब आदमी को देखा । यह आदमी इंजनों और डिब्बों से खेल रहा था लेकिन यह डिब्बे और इंजन खिलौने नहीं बल्कि असली थे, असली । कभी वह प्लेटफार्म पर उछल कर आ जाता तो कभी डिब्बों के नीचे चला जाता । वह कोई बहुत अजीब और मजेदार खेल खेल रहा था ।
- क. रेलवे स्टेशन पर पापा ने कैसे आदमी को देखा ?  
अ) अजीब आदमी को                      ब) सीधे आदमी को
- ख. वह आदमी क्या कर रहा था ?  
अ) इंजनों और डिब्बों से खेल रहा था ।    ब) सो रहा था ।
- ग. क्या ये इंजन और डिब्बे खिलौने थे ?  
अ) हाँ    ब) ना
- घ. वह कभी प्लेट फार्म पर उछल कर आ जाता तो -  
अ) कभी डिब्बों के नीचे                      ब) कभी डिब्बों के ऊपर
- ड. वह मजेदार क्या कर रहा था ।  
अ) नाटक    ब) खेल
- प्र.2 निम्नलिखित पठित पद्यांश को पढ़कर पूछे गये प्रश्नों के उत्तर दीजिये -  
झब्बर - झब्बर वालों वाले  
गुब्बारे से गालों वाले  
लगे दौड़ने आसमान में  
झूम - झूम कर काले बादल ।  
कुछ जोकर - से तोंद फुलाए  
कुछ हाथी - से सँड़ उठाए  
कुछ ऊँटो - से कूबड़ वाले  
कुछ परियों - से पंख लगाए
1. बादल आसमान में कैसे दौड़ रहे हैं ?  
अ) झूम - झूमकर                              ब) फुदक - फुदक कर
2. बादल जोकर की तरह क्या फुलाए है,  
अ) तोंद    ब) गुब्बारा
3. बादल किसकी तरह सँड़ उठाए है ।  
अ) हाथी से    ब) गणेश से
4. बादल किसके जैसे पंख लगाए है ।  
अ) परियों से    ब) मोर से
5. बादल किसकी तरह कूबड़ वाले है ।  
अ) ऊँट से    ब) जिराफ से
- प्र.3 निम्नलिखित प्रश्नों के सही उत्तर चुनकर लिखिए -
1. बादशाह अकबर किसे पसंद करते थे ?  
अ) बीरबल    ब) भीम
2. दिनेश क्या खोज रहा था ?  
अ) पतंग    ब) गेंद
3. पापा ने अजीब आदमी को कहाँ देखा ?  
अ) स्टेशन में    ब) घर में
4. अकबर के किस दरबारी को अपनी विद्या और बुद्धि पर बहुत अभिमान था ?  
अ) ख्वाजा सरा    ब) रहीम



**खण्ड 'ब'**

प्र.8 निम्नलिखित अपठित गद्यांश को पढ़कर पूछे गए प्रश्नों के उत्तर लिखिए -

हमारे राष्ट्रपिता महात्मा गांधी का जन्म 2 अक्टूबर 1869 को पोरबंदर (गुजरात) में हुआ था। इनका पूरा नाम मोहनदास करमचंद गांधी था। वे बचपन से दयालु स्वभाव के थे। इनकी पत्नी का नाम कस्तुरबा गांधी था। उच्च शिक्षा के लिए वो इंग्लैंड गए। इनके बताए गए सत्य, अहिंसा के रास्ते पर चलकर भारत स्वतंत्र हुआ। सारा देश उन्हें बापू कहकर पुकारता है।

- क. गांधी जी का पूरा नाम क्या था ?  
अ) मोहनदास करमचंद गांधी                      ब) सोहन दास
- ख. इनकी पत्नी का क्या नाम था ?  
अ) सुधा    ब) कस्तुरबा गांधी
- ग. हमारे राष्ट्रपिता कौन हैं ?  
अ) महात्मा गांधी                                      ब) कस्तुरबा गांधी
- घ. उच्च शिक्षा पाने के लिए गांधी जी कहाँ पर गए ?  
अ) इंग्लैंड    ब) जापान
- ङ. सारा देश उन्हें क्या कहकर पुकारता है।  
अ) बापू    ब) चाचा

प्र.9 व्याकरण हमें क्या सिखाता है ?

प्र.10 संज्ञा के कितने भेद होते हैं ? नाम लिखिए।

प्र.11 अर्थ के आधार पर शब्द कितने प्रकार के होते हैं ?

प्र.12 वाक्य को कितने भागों में बाँटा गया है ? नाम लिखिए ?

प्र.13 विशेषण किसे कहते हैं ? उदाहरण सहित लिखिए ?

प्र.14 वचन के भेदों के नाम लिखिए।

प्र.15 सर्वनाम शब्दों का प्रयोग किन शब्दों के स्थान पर किया जाता है ?

प्र.16 सही विकल्प पर ( ✓ ) का निशान लगाइए।

- हमारी राष्ट्रभाषा है -  
अ) हिन्दी                      ब) अंग्रेजी
- हिन्दी की लिपि है -  
अ) रोमन                      ब) देवनागरी
- व्यंजनों की संख्या है -  
अ) तैंतीस                      ब) पच्चीस
- सार्थक शब्द है -  
अ) पुस्तक                      ब) राग
- संज्ञा के भेद होते हैं -  
अ) दो                              ब) तीन
- स्त्री व पुरुष दोनों के लिए प्रयोग किया जाता है -  
अ) प्रधानमंत्री              ब) शिक्षक
- वचन के भेद होते हैं -  
अ) दो                              ब) तीन
- सर्वनाम के भेद होते हैं -  
अ) चार                              ब) छह
- संख्या का बोध कराने वाले विशेषण हैं -  
अ) लाल, मोटा, मीठा      ब) चार, दो, तीन
- पुल्लिंग शब्द बोध कराते हैं -  
अ) पुरुष जाति का              ब) स्त्री जाति का

प्र.18 विलोम शब्दों के सही जोड़ी मिलाओ -

जीवन	-	अस्त
कीर्ति	-	अवज्ञा
आरंभ	-	मृत्यु
आज्ञा	-	समाप्त
उदय	-	अपकीर्ति

प्र. 19 दिए गए शब्दों के दो - दो पर्यायवाची शब्द लिखिए -  
क) औरत ख) आँख ग) हवा घ) आग ड.) पेड़

प्र.20 बीमारी के कारण अवकाश के लिए प्राचार्य को प्रार्थना पत्र लिखिए ।

अथवा

अपने मित्र को पुस्तक मँगवाने हेतु पत्र लिखिए ।

प्र. 21 निम्न में से किसी एक विषय पर अनुच्छेद लिखिए ।  
क) दीपावली                      ब) सफाई

\*\*\*\*\*

WORKSHEET

APRIL-2017 (ENGLISH)

Name of the student:- \_\_\_\_\_ CLASS:- IV SECTION :- \_\_\_\_\_

---

**A 1) Read the following passage carefully and answer the question given below.**

The Chinese Lantern Festival is celebrated on 15<sup>th</sup> day of the first month of the Chinese calendar. It is always a full moon night .The night becomes all the more colourful with thousands of lanterns everywhere. Children go to the temples at night carrying paper lanterns. The lanterns are of various shapes and sizes, and beautifully made. They are even made in the shape of animals. The Lantern Festival marks the end of Chinese New Year celebration.

A) Tick the correct option.

a) The Lantern Festival marks the

I) beginning of Chinese New Year Celebration . \_\_\_\_

II)end of Chinese New Year Celebration . \_\_\_\_

III) beginning of winter. \_\_\_\_

b) The Lantern festival is celebrated on a

I) full moon light \_\_\_\_

II) moonless night \_\_\_\_

III) half moon light \_\_\_\_

B) Answer the following questions.

I) How does the night become on the festival day?

---

---

II) When is the Chinese Festival celebrated?

---

---



III) Write two sentences about lanterns.

---

---

C) Write the opposites of-

Night -

end-

**A 2) Underline the proper nouns and circle the common nouns.**

1. The school in our state remains closed in May and June.
2. Ramesh is hard working man.
3. Father took me to the Kid's Camp to buy some toys.
4. Both Diwali and Christmas will be on a Sunday.

**A3) Fill in the blanks with the plural form of the words given in brackets.**

- 1.) All the (man)\_\_\_\_\_ and (woman)\_\_\_\_\_ clapped for the singer.
- 2.) The (cat)\_\_\_\_\_ at the farm love to eat(mouse)\_\_\_\_\_.
- 3.) The farmer took all the (goose)\_\_\_\_\_ and(ox)\_\_\_\_\_ into the animal shelter.
- 4.) Children should wash their(foot)\_\_\_\_\_ and brush their(tooth)\_\_\_\_\_ before bedtime.

**A4) Write whether the underlined word is a concrete or an abstract noun.**

- 1.) Always speak the truth.
- 2.) Sheep give us wool.
- 3.) We all love honesty.
- 4.) I am found of reading books.
- 5.) Wisdom is better than strength.
- 6.) Berlin is a beautiful city.

**Worksheet (Class IV – English)**

**I. Read the passage and answer each question.**

**Why does the ocean have waves?**

The ocean is never still. Whether observing from the beach or a boat, we expect to see waves on the horizon. Waves are created by energy passing through water, causing it to move in a circular motion. However, water does not actually travel in waves. Waves transmit energy, not water, across the ocean and if not obstructed by anything, they have the potential to travel across an entire ocean basin.

Waves are most commonly caused by wind. Wind-driven waves, or surface waves, are created by the friction between wind and surface water. As wind blows across the surface of the ocean or a lake, the continuous disturbance creates a wave crest. These types of waves are found globally across the open ocean and along the coast.

Most potentially hazardous waves can be caused by severe weather, like a hurricane. The strong winds and pressure from this type of severe storm causes storm surge. Series of long waves that are created far from shore in deeper water intensify as they move closer to land. Other hazardous waves can be caused by underwater disturbances that displace large amounts of water quickly, such as earthquakes , landslides or volcanic eruptions. These very long waves are called tsunamis. Storm surge and tsunamis are not the types of waves you can imagine crashing down on the shore. These waves roll upon the shore like a massive sea level rise and can reach far distances inland.

The gravitational pull of the sun and moon on the earth also causes waves. These waves are tides or, in other words, tidal waves. It is a common misconception that a tidal wave is also a tsunami. The cause of tsunamis is not related to tide information at all but can occur in any tidal state.

**1.What creates waves?**\_\_\_\_\_

\_\_\_\_\_

**2.What could be an obstruction to waves?**\_\_\_\_\_

\_\_\_\_\_

**3.Why do you think wind is the most common cause of wave creation?**

\_\_\_\_\_

\_\_\_\_\_

**4.What are some causes of hazardous waves?**\_\_\_\_\_

\_\_\_\_\_

**5. What causes tidal waves?**\_\_\_\_\_

\_\_\_\_\_

**II. Choose the pair of words that best express a relationship similar to that of the original pair.**

1. The function of a **musician** is to make **music**. The function of a \_\_\_\_\_ is to make \_\_\_\_\_.  
a) chef : food      b) machine : snow      c) child : art      d) shower : water
2. A **whale** lives in the **ocean**. A \_\_\_\_\_ lives in the \_\_\_\_\_.  
a) car : garage      b) snake : ocean      c) tiger : jungle      d) chair : table
3. Someone who is **sad** lacks **happiness**. Someone who is \_\_\_\_\_ lacks \_\_\_\_\_.  
a) weak : strength      b) sweet : flavour      c) fast : time      d) pretty : beauty
4. The **tongue** is used to **taste**. The \_\_\_\_\_ is used to \_\_\_\_\_.  
a) Boat : swim      b) bed : sit      c) bag : buy      d) nose : smell
5. A **chair** is used to **sit**. A \_\_\_\_\_ is used to \_\_\_\_\_.  
a) cup : drink      b) bottle : break      c) book : read      d) eye : listen
6. Something that is **tiny** is very **little**. Something that is \_\_\_\_\_ is very \_\_\_\_\_.  
a) huge : big      b) long : tall      c) small : loud      d) neat : messy
7. Something that is **safe** is not **dangerous**. Something that is \_\_\_\_\_ is not \_\_\_\_\_.  
a) silent : noisy      b) upset : late      c) wise : smart      d) fast: quick
8. A **wrench** is a kind of **tool**. A \_\_\_\_\_ is a kind of \_\_\_\_\_.  
a) cow : milk      b) radio : sound      c) tree : forest      d) carrot : vegetable

## WORKSHEET (Chapter IV) - English

Name : \_\_\_\_\_

Sec : \_\_\_\_

**I. Read the passage given below and answer the questions that follow.**

Ten students took their books and went forth to school. Five of them were foolish and five wise. The foolish ones had not completed their English assignment while the wise ones had. Since the English class was after lunch, the foolish ones had hoped to finish the assignment during the recess. But an unexpected thing happened and the ten minutes break was eliminated. The unprepared foolish students were frightened of their English teacher, who took absolutely no excuses for late or incomplete assignments.

Now, the foolish said to the wise, "Give us your homework, so that we may copy it, otherwise the teacher will punish us." But the wise students answered, "No, when the teacher reads our essays and finds very much the same, we shall all be in trouble."

When it was time for the English period, those who were prepared, entered the class-room with confidence and they received 'A' grade for the day. But the others entered with fear and were duly punished for their neglect. So, it is clear that negligence leads to humiliation.

**Questions:**

1. How many students went to school ?

\_\_\_\_\_

2. How many students did not complete their HW ?

\_\_\_\_\_

3. Why were the foolish students frightened ?

\_\_\_\_\_

4. What did the foolish ones tell the wise ones ?

\_\_\_\_\_

5. How were the wise ones rewarded ?

\_\_\_\_\_

• Write opposites of the following :

1. wise \_\_\_\_\_ 2. prepared \_\_\_\_\_  
3. finish \_\_\_\_\_ 4. complete \_\_\_\_\_

\* Make sentences of your own with the following words taken from the passage.

1. frightened \_\_\_\_\_  
2. trouble \_\_\_\_\_  
3. assignment \_\_\_\_\_

II. Rewrite these sentences using pronouns instead of the nouns given in bold letters.

(a) Meera is my cousin. **Meera** is a dancer.

\_\_\_\_\_

(b) Rahul is in class 5. **Rahul** is the class monitor. The children have to listen to **Rahul**.

\_\_\_\_\_

(c) My friend has a dog. **The dog** is called Pepper. My friend is fond of Pepper.

\_\_\_\_\_

(d) This is **my textbook**.

\_\_\_\_\_

(e) I need a pen. Can I borrow **your pen** ?

\_\_\_\_\_

III. Rewrite these sentences replacing the underlined words with pronouns. Change the verbs if necessary.

(a) Susan is a girl. Susan is a good student.

\_\_\_\_\_

(b) The Principal tells the boys and girls that boys and girls must be silent during prayer.

\_\_\_\_\_

(c) Raju, Prem and Prakash say : Raju, Prem and Prakash are riding bicycles. Those bicycles belong to Raju, Prem and Prakash.

---

---

(d) Gouri is meeting her aunt and uncle. Gouri's aunt and uncle are visiting Gouri's house for the first time.

---

---

(e) Lovely told his friends about his new pet dog. Lovely asked his friends to come and see the dog. Lovely said that his pet dog is a Spaniel.

---

---

IV. Fill in the blanks with **a** or **an**.

(a) \_\_\_\_\_ cow and \_\_\_\_\_ ox.

(b) \_\_\_\_\_ ogre and \_\_\_\_\_ prince.

(c) \_\_\_\_\_ squirrel and \_\_\_\_\_ eagle.

(d) \_\_\_\_\_ aeroplane and \_\_\_\_\_ helicopter.

(e) \_\_\_\_\_ couch and \_\_\_\_\_ chair.

V. The articles are missing in the following sentences. Mark the place where an article is required with a ' / '. Then write the missing article or articles in the space provided.

(a) There is apricot and peach in fruit bowl.

---

(b) Table is piece of furniture.

---

(c) Farmer owns cow, goat and sheep.

---

(d) Rose is beautiful flower.

---

(e) Sun sets in west.

---

VI. Ravi has made some mistakes in the following sentences. Circle the mistakes and rewrite the sentences correctly.

(a) He is a honest and hard-working man.

---

(b) His father is an wise , old man.

---

(c) She gave an pink rose today.

---

(d) She carries an heavy box full of tools.

---

(e) The gardener has a iron box.

---

\*\*\*\*\*

# O. P. JINDAL SCHOOL, RAIGARH (CG) 496001

Phone: 07762-227042, 227293, 227001 (Extn. 49801, 49802, 49804, 49806); Fax: 07762-262613; website: www.opjsrgh.in; e-mail:opjsraigarh@jspl.com

## WORKSHEET (SUBJECT – ENGLISH)

NAME OF THE STUDENT-

CLASS-IV SEC-

I. Read this passage and underline all the adjectives you can find.

Once there lived a poor shoe maker next to the house of a rich man. He was a carefree and happy person. Every day, the shoemaker sang lovely songs while he did his hard work. All the young children in the town loved to hear the shoemaker sing his sweet songs. They sat on small chairs and listened to him sing.

The rich man who lived next door, stayed awake every night counting his sparkling gold coins. He would sleep during the day. But the shoe maker's songs kept him awake. He wanted to put an end to the singing.

One day the rich man thought of a brilliant plan. He called for the shoemaker and gave him a bag full of shiny coins as a gift. The shoe maker was surprised, but happily took the gold coins. The shoe maker went home and stored the coins in his wooden cupboard. He could not stop thinking and worrying about somebody stealing his precious coins. And from that day onwards the worried shoe maker stopped singing!

II. Fill up each blank :

- (i) The base form of an adjective is called its \_\_\_\_\_ degree.
- (ii) The positive degree of an adjective used for comparison is called a \_\_\_\_\_ .
- (iii) The comparative degree of an adjective is generally \_\_\_\_\_ by *than*.
- (iv) The superlative degree of an adjective is generally \_\_\_\_\_ by *the*.
- (v) A simile can be positive or \_\_\_\_\_ .

III. Fill up each blank with the comparative degree of the adjective given in brackets.

- (i) Rahul is a \_\_\_\_\_ batsman than Sayeed. (good)
- (ii) Horses are \_\_\_\_\_ than other animals used for rides. (faithful)
- (iii) The Jama Masjid is \_\_\_\_\_ in size than the Moti Masjid. (large)
- (iv) The moonlight is \_\_\_\_\_ than sunlight. (pleasant)
- (v) Mothers are generally \_\_\_\_\_ than fathers. (kind)

IV. Fill up each blank with the superlative degree of the adjective given in brackets.

- (i) The Buland Darwaza is the \_\_\_\_\_ gate in the world. (high)
- (ii) Mumbai is the \_\_\_\_\_ city in our country. (large)
- (iii) Mount Everest is the \_\_\_\_\_ mountain-peak on the earth. (high)
- (iv) At present, gold is the \_\_\_\_\_ metal in the market. (precious)
- (v) The Taj Mahal is the \_\_\_\_\_ tomb in the world. (elegant)

V. Fill up each blank to make a proper comparison.

As _____ as coal.	As _____ as a peacock.
As _____ as a rock.	As _____ as a feather.
As _____ as a bee.	As _____ as grass.
As _____ as a lark.	As _____ as a fox.
As _____ as ABC.	As _____ as snow.



VI. Unscramble the letters given in brackets to find the adjective that suits each noun.

- (a) The cat has a (mtohs)\_\_\_\_\_ coat.
- (b) The children in the class-room are very (tqiue)\_\_\_\_\_ .
- (c) The children in the playground are very (ysion)\_\_\_\_\_ .
- (d) It is difficult to bring a car into this (rwoanr)\_\_\_\_\_ lane.
- (e) Two buses can go down this (dewi) \_\_\_\_\_ road.

VII. Choose the best describing word for each animal and fill in the blanks.

- (i) A \_\_\_\_\_ rabbit. ( brave/cruel/timid)
- (ii) A \_\_\_\_\_ crocodile. ( kind/hungry/fast)
- (iii) A \_\_\_\_\_ dog. (good/cruel/faithful)
- (iv) A \_\_\_\_\_ tiger.(cunning/strong/fierce)
- (v) A \_\_\_\_\_ elephant.(huge/heavy/faithful)

VIII. Underline the adjectives in the following sentences.

- (i) The river is wide and deep.
- (ii) This is my own wooden trolley.
- (iii) His new neighbour is a friendly man.
- (iv) He is a bright, hard-working and obedient student.
- (v) She is a brilliant student.

IX. Fill in the blanks with the correct adjectives from the brackets.

- (i) \_\_\_\_\_ (What/Why) a beautiful flower !
- (ii) \_\_\_\_\_(Which/Why) colour is your favourite ?
- (iii) This is the \_\_\_\_\_ (very/own) bag Ram brought to school.
- (iv) This is the \_\_\_\_\_ (own/very) seat number I had last time.
- (v) \_\_\_\_\_ (What/Which) team won the match ?

X. Circle the correct form of the adjective to complete the following sentences.

- (i) This is the juicier/juiciest of the mangoes.
- (ii) The Shatabdi Express is fast/faster than the Rajdhani Express.
- (iii) These lights are bright/brighter than the ones in the next room.
- (iv) Girish is busy/busier man.
- (v) The last question is the easier/easiest one to answer.

\*\*\*\*\*

## WORKSHEET

### APRIL-2017 (MATHS)

Name of the student:- \_\_\_\_\_ CLASS:- IV SECTION :- \_\_\_\_\_

---

1. Arrange in vertical column and add:

a)  $378 + 742$

(b)  $761 + 127$

2. Divide the following and write the quotient and the remainder:

a)  $259 \div 3$

(b)  $784 \div 9$

(c)  $533 \div 4$

3. Fill in the blanks:

a) 1 lakh = \_\_\_\_\_

b) One hundred thousand = \_\_\_\_\_ lakh.

c) A brick is \_\_\_\_\_ in shape.

d) Each face of brick is \_\_\_\_\_ in shape.

e) Dice is \_\_\_\_\_ in shape.

f) A Brick has \_\_\_\_\_ number of faces, \_\_\_\_\_ number of edges and \_\_\_\_\_ number of vertices.

g) Weight of the brick is approximately equal to \_\_\_\_\_.

4. A truck carries 4200 bricks .How many bricks 18 such trucks carry?

5. The cost of 1000 bricks is Rs. 3200.Raman needs 700 bricks for his courtyard, find how much he has to pay?

6. Using bricks draw the following:

a) A jaali pattern

(b) A pattern with symmetry

7. The given table shows the prices of different types of bricks:

Old bricks	Rs.1200 for one thousand bricks
New bricks from Intapur	Rs.1800 for one thousand bricks
New bricks from Brickabad	Rs.2000 for one thousand bricks

Answer the following questions:

a) Ajay decided to buy the new bricks from Brickabad.  
He bought four thousand bricks. How much did he pay?

b) What he will pay if he buys 600 new bricks from Intapur ?

**Worksheet (Class IV – Maths)**

**(Ch-2 and Ch-3)**

**Q1. Choose the correct option then fill in the Blanks.**

- a) Standard unit of length is.....(m, kg, km, cm).
- b) Suitable unit for measurement of the length of Ant is..... (m, cm, mm, km).
- c) Suitable unit for measurement of the length of a bus is..... (m, cm, mm, km).
- d) Suitable unit for measurement of distance between earth and moon is..... (m, cm, mm, km).
- e)  $1000\text{cm} = \dots\dots\dots\text{m}$ .
- f)  $2\text{km } 50\text{m} = \dots\dots\dots\text{m}$ .
- g)  $4356\text{m} = \dots\dots\dots\text{km}\dots\dots\dots\text{m}$ .
- h)  $29\text{km } 342\text{m} = \dots\dots\dots\text{m}$ .

**Q2. Write in vertical column then find the sum /difference.**

- a)  $4\text{m } 44\text{cm} + 6\text{m } 2\text{cm} + 50\text{m}$
- b)  $20\text{km} - 5\text{km } 25\text{m}$
- c)  $20\text{m} - 5\text{m } 25\text{cm}$
- d)  $23\text{m} + 30\text{cm} + 2\text{m } 45\text{cm} + 2\text{m } 9\text{cm}$

**Q3. A bridge is 144m long. How many buses of length 12m can stand over the bridge if the distance between the buses will be considered negligible?**

**Q4. A truck can carry 154 cartons of biscuits. One carton contains 30 packets of biscuits then find how many packs of biscuits can be carried by the truck?**

**Q5. Capacity of a bus is 75 people. How many buses are required to take 600 people?**

**Q6. Divide then check**

- a)  $12467 \div 15$
- b)  $28753 \div 20$

## WORKSHEET (Chapter IV & V) - Maths

Name : \_\_\_\_\_

Sec : \_\_\_\_

### I. Fill in the blanks:-

1. There are \_\_\_\_\_ divisions on the face of a clock.
2. Half an hour = \_\_\_\_\_ minutes.
3. Quarter of an hour = \_\_\_\_\_ minutes.
4. Three quarters of an hour = \_\_\_\_\_ minutes.
5. \_\_\_\_\_ Days make a fort night.
6. There are \_\_\_\_\_ years in a decade and \_\_\_\_\_ years in a century.

### II. Conversion:-

1. 5 hours 20 minutes to minutes.
2. 2 days and 1 hour to hours.
3. 250 minutes to hours and minutes.
4. 562 hours to days and hours.

### III. Fill in the blanks:-

1. 6 hours = \_\_\_\_\_ minutes.
2. 5 days = \_\_\_\_\_ hours.
3. 7 weeks = \_\_\_\_\_ days.
4. 90 days = \_\_\_\_\_ months.
5. 12 minutes = \_\_\_\_\_ seconds.
6. 120 seconds = \_\_\_\_\_ minutes.

### IV. Change the 24 hr clock time to 12 hr clock time:

1. 1145 hr \_\_\_\_\_.
2. 0910 hr \_\_\_\_\_.
3. 1320 hr \_\_\_\_\_.
4. 1650 hr \_\_\_\_\_.

### V. Change the 12 hr clock time to 24 hr clock time:-

1. 06:30 am \_\_\_\_\_.
2. 10:45pm \_\_\_\_\_.
3. 03:20 pm \_\_\_\_\_.
4. 11:50 am \_\_\_\_\_.

### VI. Read the time and write it in figure using am or pm:-

1. Half past one at night \_\_\_\_\_.
2. Quarter to three in the evening \_\_\_\_\_.
3. Twenty minutes past midnight \_\_\_\_\_.
4. Ten minutes to five in the evening \_\_\_\_\_.
5. Quarter past noon \_\_\_\_\_.
6. Eight twenty six in the morning \_\_\_\_\_.

### VII. Word Problems:-

1. A quiz show on T.V takes 1 hour 30 minutes. The advertisements during the show take 26 minutes. How much time does the quiz take?

2. A Football started at 5:00pm and finished at 6:30 pm what was the duration of the match?

**VIII. Draw the top side and front view of the following:-**

1. Bottle Cap.

2. Funnel.

**IX. Fill in the blanks:-**

1. A dice is like a \_\_\_\_\_.

2. Dice has \_\_\_\_\_ faces, \_\_\_\_\_ vertices and \_\_\_\_\_ edges.

3. The numbers on the opposite faces of the dice always add up to \_\_\_\_\_.

4. Each face of a dice is \_\_\_\_\_ in shape.

**X. Draw a dice showing its three faces and also show the numbers 5 and 3 on it:-**

**XI. Which numbers will be towards the opposite to the given numbers:-**

1.  $1 + \underline{\quad} = 7$ .

2.  $5 + \underline{\quad} = 7$

3.  $3 + \underline{\quad} = 7$

**XII. Draw the net of the following solid shapes:-**

1. Cube.

2. Cuboid.

# O. P. JINDAL SCHOOL, RAIGARH (CG) 496001

Phone: 07762-227042, 227293, 227001 (Extn. 49801, 49802, 49804, 49806); Fax: 07762-262613; website: www.opjsrgh.in; e-mail: opjsraigarh@jspl.com

SUBJECT - (MATHEMATICS)

NAME OF THE STUDENT-

CLASS SEC

Q1. Fill in the blanks.

- a) The smallest unit of length is \_\_\_\_\_.
- b) The highest unit of length is \_\_\_\_\_.
- c) \_\_\_\_\_ m = 1 Km
- d) 4 Km = \_\_\_\_\_ m
- e) 6954 m = \_\_\_\_\_ Km \_\_\_\_\_ m
- f) The basic unit of length is \_\_\_\_\_.
- g) \_\_\_\_\_ cm = 1 m
- h) 5040 cm = \_\_\_\_\_ m \_\_\_\_\_ cm
- i) 700 cm = \_\_\_\_\_ m
- j) 8 m 20 cm = \_\_\_\_\_ cm

Q2. How many cm should be added to make it equal to 1m?

- a) 92 cm + \_\_\_\_\_ cm
- b) 36 cm + \_\_\_\_\_ cm
- c) 55 cm + \_\_\_\_\_ cm
- d) 74 cm + \_\_\_\_\_ cm

Q3. How many 'm' should be added to make it equal to 1Km?

- a) 250m + \_\_\_\_\_ m
- b) 904m + \_\_\_\_\_ m
- c) 418m + \_\_\_\_\_ m
- d) 500m + \_\_\_\_\_ m

Q4. Fill in the blanks with <, > or =

- a) 4000 m \_\_\_\_\_ 3 Km
- b) 1000 cm \_\_\_\_\_ 1 m
- c) 8 Km \_\_\_\_\_ 800 cm
- d) 3007 m \_\_\_\_\_ 37 Km

Q5. Which of the given unit is appropriate for measurement of following? (cm, m, Km)

- a) Edge of a book \_\_\_\_\_
- b) Distance between your school and your home \_\_\_\_\_
- c) Length of a 2000- rupee note \_\_\_\_\_
- d) Length of your room \_\_\_\_\_
- e) Height of a building \_\_\_\_\_

\*\*\*\*\*